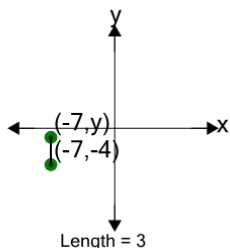




Cartesian Grid - Line Length to Missing Coordinate - Including Negative

**1**

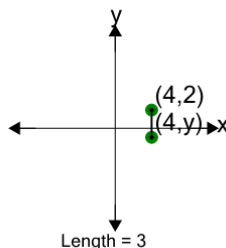
Find the missing value for y if the line is 3 in length



A	5	B	8
C	2	D	3
E	-9	F	-1

2

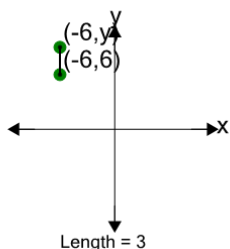
Find the missing value for y if the line is 3 in length



A	-3	B	-1
C	-8	D	2
E	4	F	-5

3

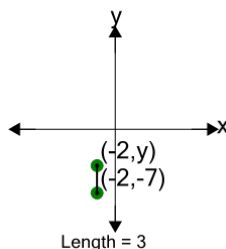
Find the missing value for y if the line is 3 in length



A	6	B	3
C	9	D	12
E	1	F	-1

4

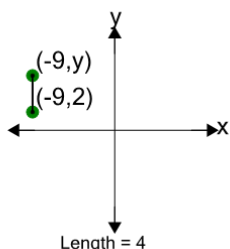
Find the missing value for y if the line is 3 in length



A	-4	B	0
C	2	D	-14
E	-10	F	-3

5

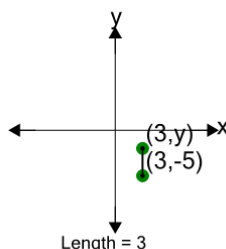
Find the missing value for y if the line is 4 in length



A	8	B	6
C	9	D	15
E	-3	F	14

6

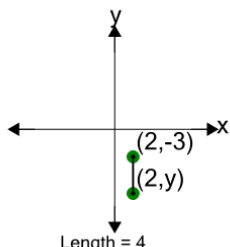
Find the missing value for y if the line is 3 in length



A	0	B	-10
C	5	D	-2
E	-12	F	-4

7

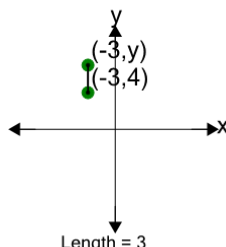
Find the missing value for y if the line is 4 in length



A	-10	B	-7
C	-2	D	-6
E	2	F	-14

8

Find the missing value for y if the line is 3 in length



A	7	B	0
C	5	D	-2
E	10	F	4