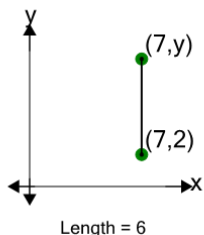




Cartesian Grid - Line Length to Missing Coordinate - Positive Only

**1**

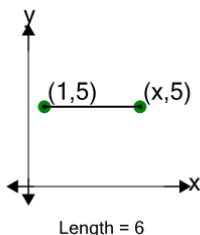
Find the missing value for y if the line is 6 in length



A	11	B	5
C	13	D	8
E	6	F	4

2

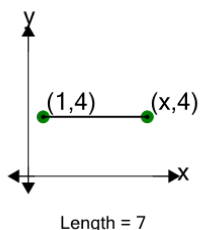
Find the missing value for x if the line is 6 in length



A	16	B	6
C	7	D	0
E	8	F	4

3

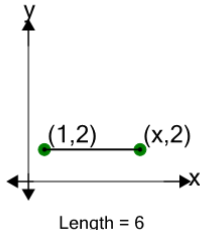
Find the missing value for x if the line is 7 in length



A	0	B	8
C	17	D	4
E	3	F	10

4

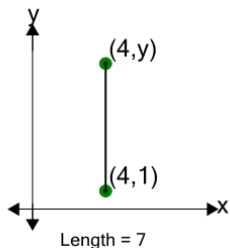
Find the missing value for x if the line is 6 in length



A	-2	B	2
C	5	D	-1
E	7	F	3

5

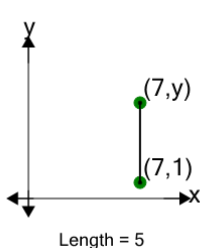
Find the missing value for y if the line is 7 in length



A	-2	B	14
C	8	D	0
E	2	F	9

6

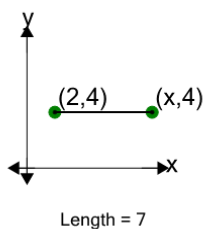
Find the missing value for y if the line is 5 in length



A	6	B	12
C	10	D	4
E	2	F	14

7

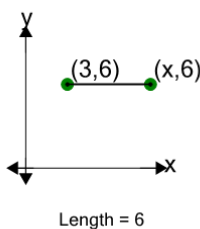
Find the missing value for x if the line is 7 in length



A	0	B	6
C	2	D	11
E	3	F	9

8

Find the missing value for x if the line is 6 in length



A	3	B	9
C	8	D	-1
E	15	F	7