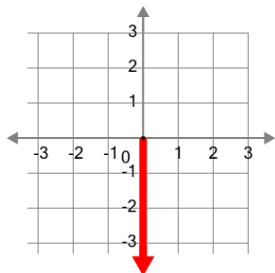




## Cartesian Grid - Axis (negative, just name)



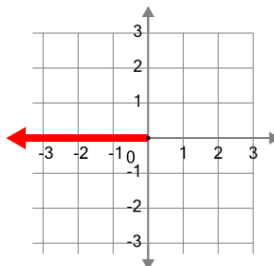
1



What is the name of the axis that is highlighted?

| A | B |
|---|---|
| Y | X |

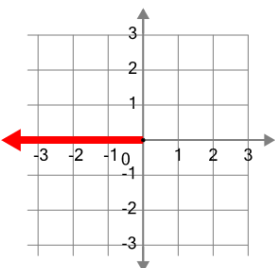
2



What is the name of the axis that is highlighted?

| A | B |
|---|---|
| X | Y |

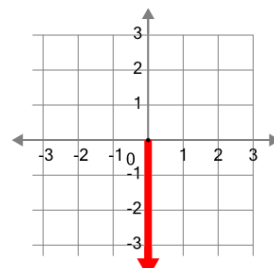
3



What is the name of the axis that is highlighted?

| A | B |
|---|---|
| Y | X |

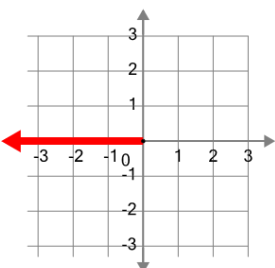
4



What is the name of the axis that is highlighted?

| A | B |
|---|---|
| Y | X |

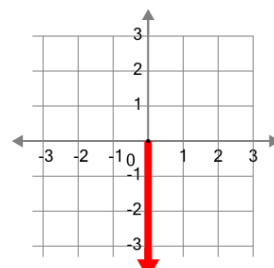
5



What is the name of the axis that is highlighted?

| A | B |
|---|---|
| Y | X |

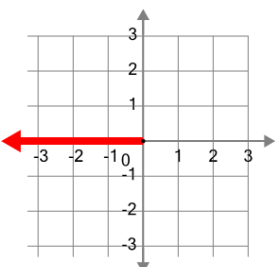
6



What is the name of the axis that is highlighted?

| A | B |
|---|---|
| X | Y |

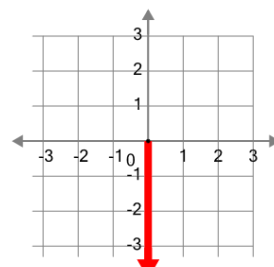
7



What is the name of the axis that is highlighted?

| A | B |
|---|---|
| X | Y |

8



What is the name of the axis that is highlighted?

| A | B |
|---|---|
| X | Y |