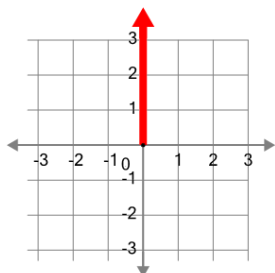


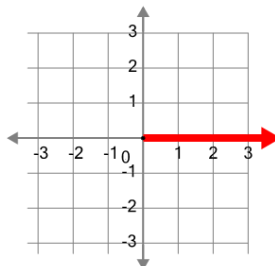


Cartesian Grid - Axis (positive, name and direction)

1

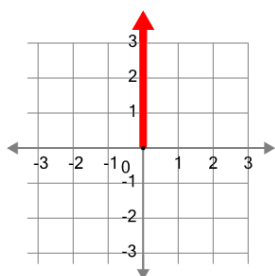
What is the name of the axis that is highlighted?

- | | |
|---|--------------|
| A | X (positive) |
| B | X (negative) |
| C | Y (negative) |
| D | Y (positive) |

2

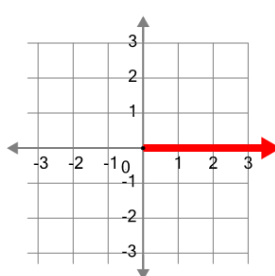
What is the name of the axis that is highlighted?

- | | |
|---|--------------|
| A | X (negative) |
| B | Y (positive) |
| C | X (positive) |
| D | Y (negative) |

3

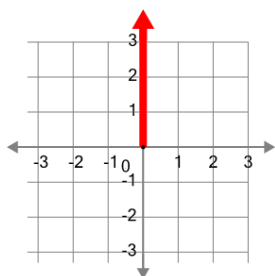
What is the name of the axis that is highlighted?

- | | |
|---|--------------|
| A | Y (negative) |
| B | X (negative) |
| C | Y (positive) |
| D | X (positive) |

4

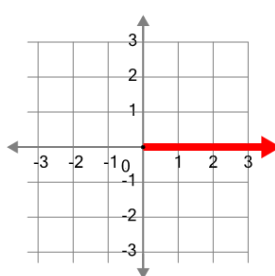
What is the name of the axis that is highlighted?

- | | |
|---|--------------|
| A | Y (negative) |
| B | Y (positive) |
| C | X (positive) |
| D | X (negative) |

5

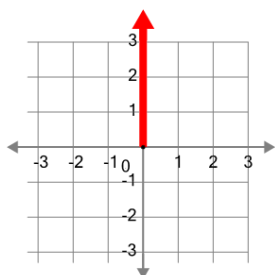
What is the name of the axis that is highlighted?

- | | |
|---|--------------|
| A | X (negative) |
| B | X (positive) |
| C | Y (negative) |
| D | Y (positive) |

6

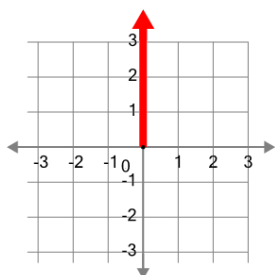
What is the name of the axis that is highlighted?

- | | |
|---|--------------|
| A | X (negative) |
| B | Y (negative) |
| C | X (positive) |
| D | Y (positive) |

7

What is the name of the axis that is highlighted?

- | | |
|---|--------------|
| A | X (positive) |
| B | Y (positive) |
| C | X (negative) |
| D | Y (negative) |

8

What is the name of the axis that is highlighted?

- | | |
|---|--------------|
| A | Y (positive) |
| B | Y (negative) |
| C | X (negative) |
| D | X (positive) |