



Cartesian Grid - Axis Only (negative, name and direction)



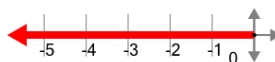
1



What is the name of the axis that is highlighted?

- | | |
|---|--------------|
| A | X (negative) |
| B | Y (positive) |
| C | X (positive) |
| D | Y (negative) |

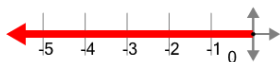
2



What is the name of the axis that is highlighted?

- | | |
|---|--------------|
| A | X (positive) |
| B | Y (positive) |
| C | Y (negative) |
| D | X (negative) |

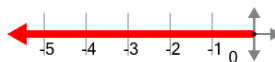
3



What is the name of the axis that is highlighted?

- | | |
|---|--------------|
| A | Y (positive) |
| B | X (positive) |
| C | Y (negative) |
| D | X (negative) |

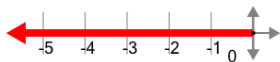
4



What is the name of the axis that is highlighted?

- | | |
|---|--------------|
| A | X (negative) |
| B | Y (negative) |
| C | Y (positive) |
| D | X (positive) |

5



What is the name of the axis that is highlighted?

- | | |
|---|--------------|
| A | X (negative) |
| B | Y (positive) |
| C | Y (negative) |
| D | X (positive) |

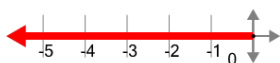
6



What is the name of the axis that is highlighted?

- | | |
|---|--------------|
| A | Y (negative) |
| B | X (positive) |
| C | X (negative) |
| D | Y (positive) |

7



What is the name of the axis that is highlighted?

- | | |
|---|--------------|
| A | X (positive) |
| B | X (negative) |
| C | Y (positive) |
| D | Y (negative) |

8



What is the name of the axis that is highlighted?

- | | |
|---|--------------|
| A | X (negative) |
| B | Y (positive) |
| C | Y (negative) |
| D | X (positive) |