
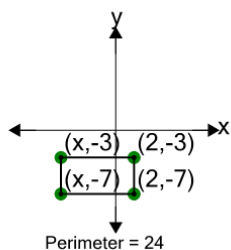




## Cartesian Grid - Perimeter (Rectangle) to Missing Coordinate - Including Negative



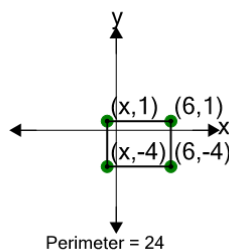
1



Find the missing value for x if the rectangle has a perimeter of 24

A	-9	B	-3
C	-2	D	-15
E	-6	F	-11

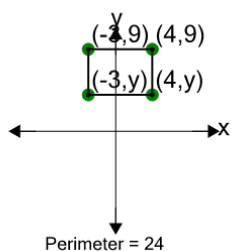
2



Find the missing value for x if the rectangle has a perimeter of 24

A	1	B	-7
C	8	D	-3
E	2	F	-1

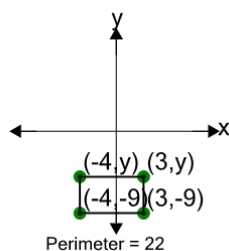
3



Find the missing value for y if the rectangle has a perimeter of 24

A	13	B	7
C	-6	D	11
E	4	F	9

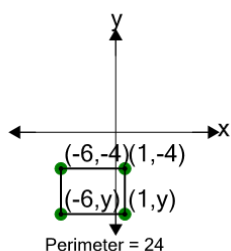
4



Find the missing value for y if the rectangle has a perimeter of 22

A	-12	B	-4
C	-3	D	-7
E	-5	F	1

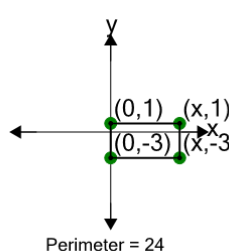
5



Find the missing value for y if the rectangle has a perimeter of 24

A	-9	B	-3
C	-4	D	-15
E	0	F	-18

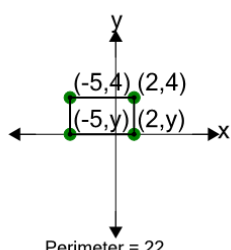
6



Find the missing value for x if the rectangle has a perimeter of 24

A	1	B	4
C	15	D	8
E	12	F	0

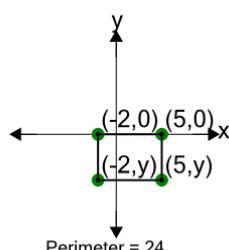
7



Find the missing value for y if the rectangle has a perimeter of 22

A	8	B	3
C	-4	D	-9
E	0	F	2

8



Find the missing value for y if the rectangle has a perimeter of 24

A	-9	B	-12
C	-2	D	-8
E	-5	F	1