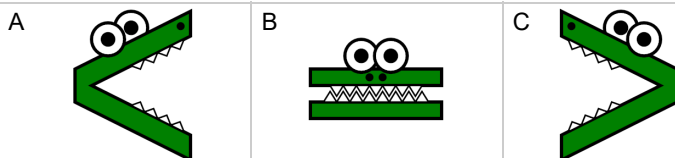




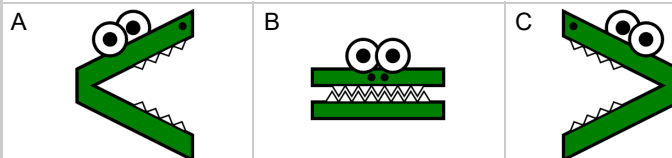
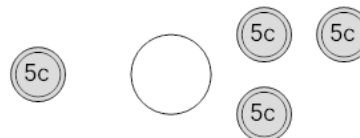
## Coin Math - Less or Greater to Alligator - Nickels



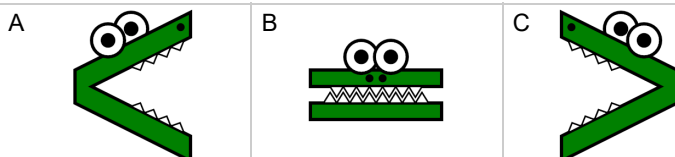
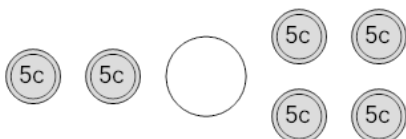
1 Which way would the alligator face to eat the coins with the largest value?



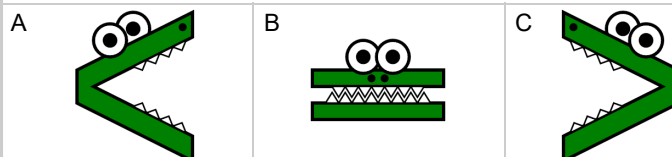
2 Which way would the alligator face to eat the coins with the largest value?



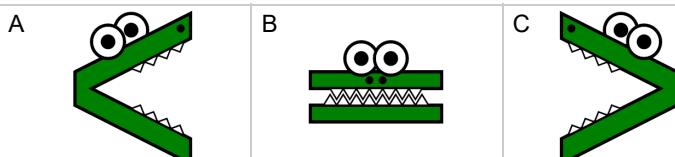
3 Which way would the alligator face to eat the coins with the largest value?



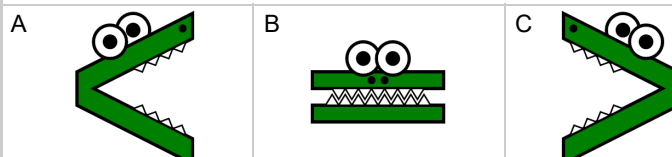
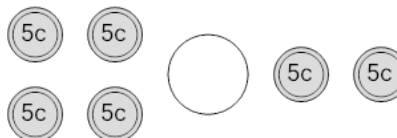
4 Which way would the alligator face to eat the coins with the largest value?



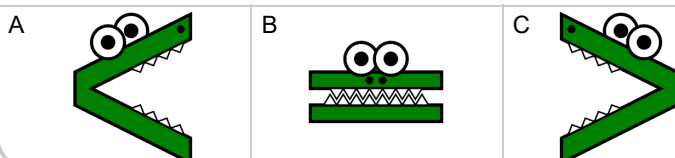
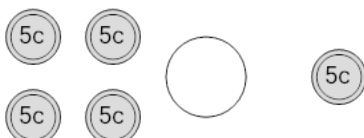
5 Which way would the alligator face to eat the coins with the largest value?



6 Which way would the alligator face to eat the coins with the largest value?



7 Which way would the alligator face to eat the coins with the largest value?



8 Which way would the alligator face to eat the coins with the largest value?

