
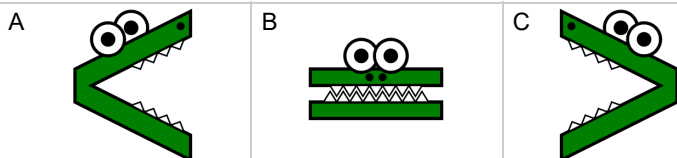
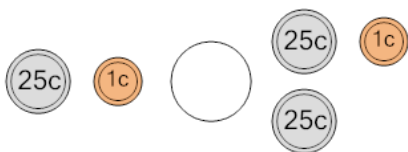




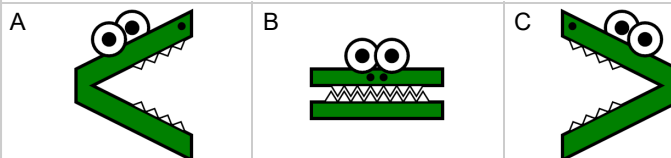
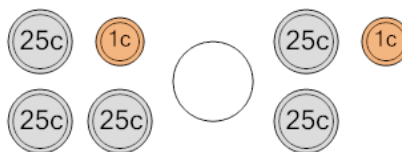
## Coin Math - Less or Greater to Alligator - Pennies, Quarters



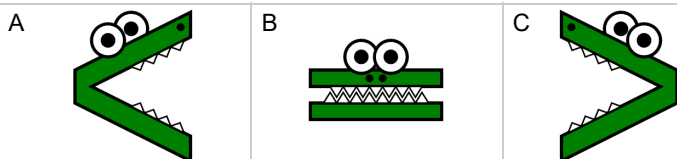
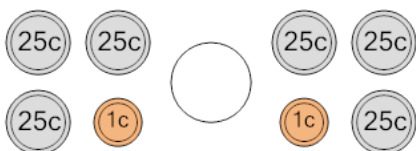
**1** Which way would the alligator face to eat the coins with the largest value?



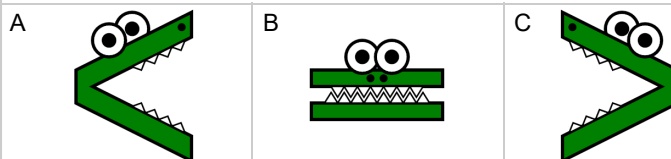
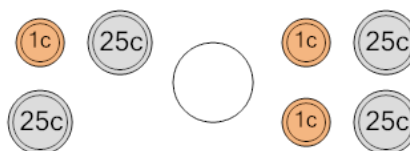
**2** Which way would the alligator face to eat the coins with the largest value?



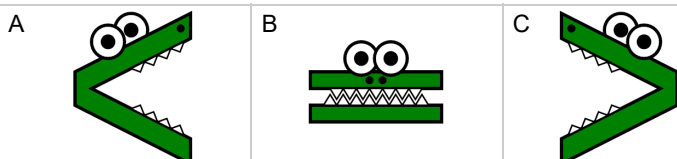
**3** Which way would the alligator face to eat the coins with the largest value?



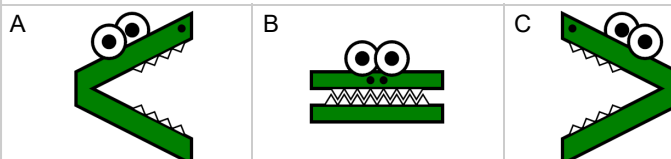
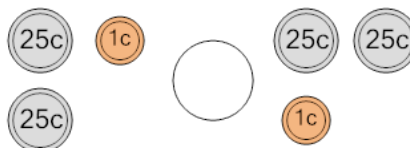
**4** Which way would the alligator face to eat the coins with the largest value?



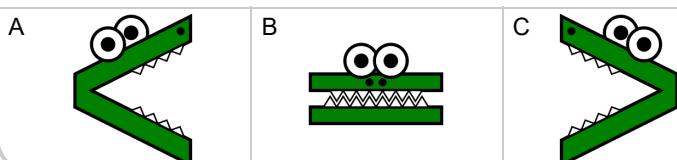
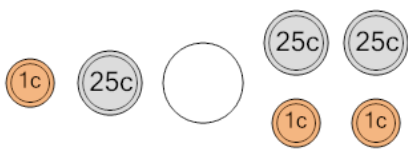
**5** Which way would the alligator face to eat the coins with the largest value?



**6** Which way would the alligator face to eat the coins with the largest value?



**7** Which way would the alligator face to eat the coins with the largest value?



**8** Which way would the alligator face to eat the coins with the largest value?

