
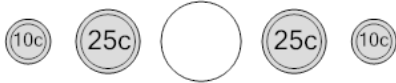




## Coin Math - Less or Greater to Symbol - Dimes, Quarters

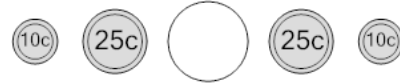


**1** Is the value of the first group less than, greater than, or equal to the second group?



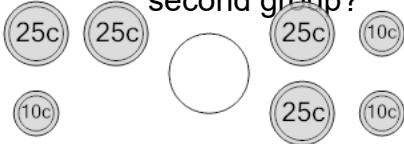
A  $<$  B  $=$  C  $>$

**2** Is the value of the first group less than, greater than, or equal to the second group?



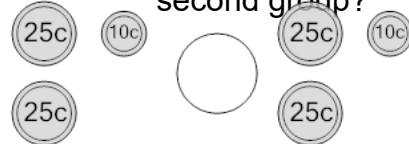
A  $<$  B  $=$  C  $>$

**3** Is the value of the first group less than, greater than, or equal to the second group?



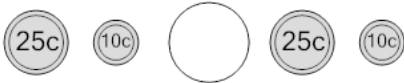
A  $<$  B  $=$  C  $>$

**4** Is the value of the first group less than, greater than, or equal to the second group?



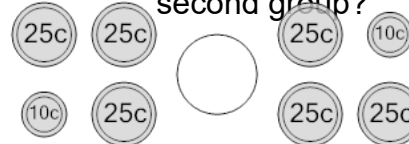
A  $<$  B  $=$  C  $>$

**5** Is the value of the first group less than, greater than, or equal to the second group?



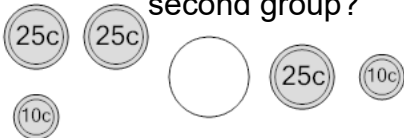
A  $<$  B  $=$  C  $>$

**6** Is the value of the first group less than, greater than, or equal to the second group?



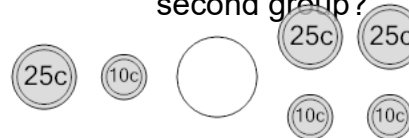
A  $<$  B  $=$  C  $>$

**7** Is the value of the first group less than, greater than, or equal to the second group?



A  $<$  B  $=$  C  $>$

**8** Is the value of the first group less than, greater than, or equal to the second group?



A  $<$  B  $=$  C  $>$