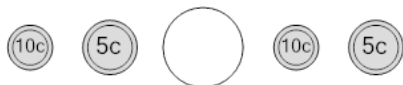




## Coin Math - Less or Greater to Symbol - Nickels, Dimes



**1** Is the value of the first group less than, greater than, or equal to the second group?



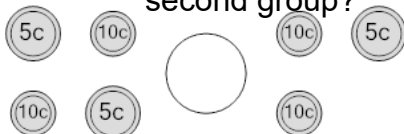
A	B	C
<	=	>

**2** Is the value of the first group less than, greater than, or equal to the second group?



A	B	C
<	=	>

**3** Is the value of the first group less than, greater than, or equal to the second group?



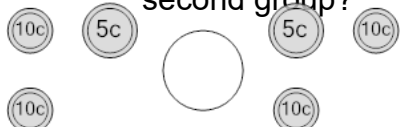
A	B	C
<	=	>

**4** Is the value of the first group less than, greater than, or equal to the second group?



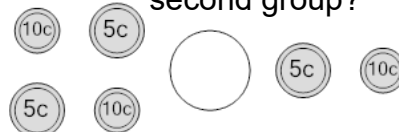
A	B	C
<	=	>

**5** Is the value of the first group less than, greater than, or equal to the second group?



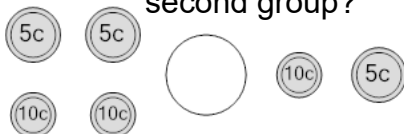
A	B	C
<	=	>

**6** Is the value of the first group less than, greater than, or equal to the second group?



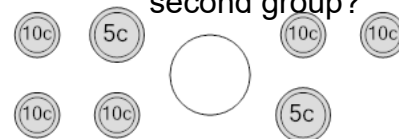
A	B	C
<	=	>

**7** Is the value of the first group less than, greater than, or equal to the second group?



A	B	C
<	=	>

**8** Is the value of the first group less than, greater than, or equal to the second group?



A	B	C
<	=	>