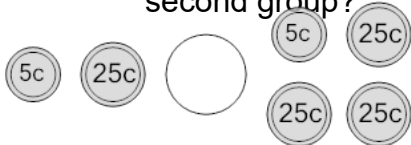




Coin Math - Less or Greater to Symbol - Nickels, Quarters



1 Is the value of the first group less than, greater than, or equal to the second group?



A

<

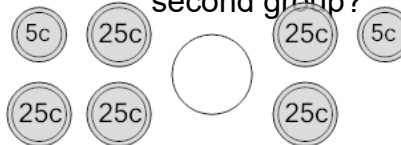
B

=

C

>

2 Is the value of the first group less than, greater than, or equal to the second group?



A

<

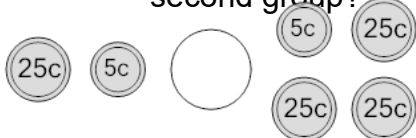
B

=

C

>

3 Is the value of the first group less than, greater than, or equal to the second group?



A

<

B

=

C

>

4 Is the value of the first group less than, greater than, or equal to the second group?



A

<

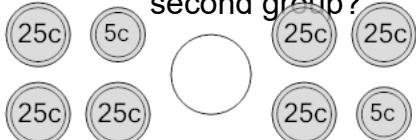
B

=

C

>

5 Is the value of the first group less than, greater than, or equal to the second group?



A

<

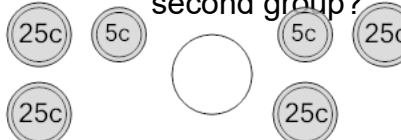
B

=

C

>

6 Is the value of the first group less than, greater than, or equal to the second group?



A

<

B

=

C

>

7 Is the value of the first group less than, greater than, or equal to the second group?



A

<

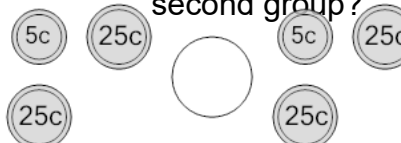
B

=

C

>

8 Is the value of the first group less than, greater than, or equal to the second group?



A

<

B

=

C

>