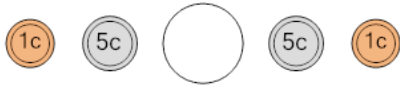




Coin Math - Less or Greater to Symbol - Pennies, Nickels

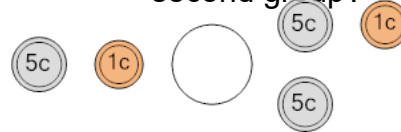


1 Is the value of the first group less than, greater than, or equal to the second group?




A	B	C
<	=	>

2 Is the value of the first group less than, greater than, or equal to the second group?



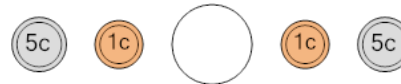
A	B	C
<	=	>

3 Is the value of the first group less than, greater than, or equal to the second group?



A	B	C
<	=	>

4 Is the value of the first group less than, greater than, or equal to the second group?



A	B	C
<	=	>

5 Is the value of the first group less than, greater than, or equal to the second group?



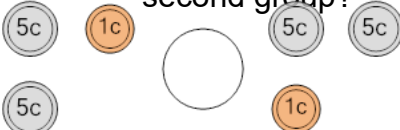
A	B	C
<	=	>

6 Is the value of the first group less than, greater than, or equal to the second group?



A	B	C
<	=	>

7 Is the value of the first group less than, greater than, or equal to the second group?



A	B	C
<	=	>

8 Is the value of the first group less than, greater than, or equal to the second group?



A	B	C
<	=	>