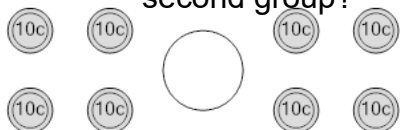




Coin Math - Less or Greater to Words - Dimes

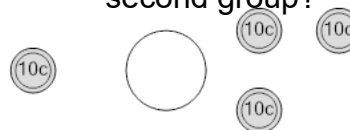


1 Is the value of the first group less than, greater than, or equal to the second group?



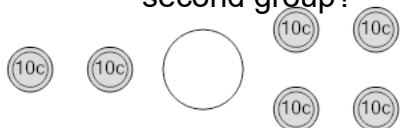
A	less	B	equals
C	greater		

2 Is the value of the first group less than, greater than, or equal to the second group?



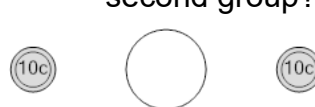
A	less	B	equals
C	greater		

3 Is the value of the first group less than, greater than, or equal to the second group?



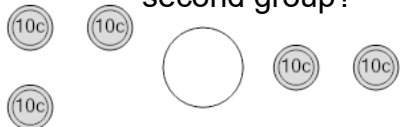
A	less	B	equals
C	greater		

4 Is the value of the first group less than, greater than, or equal to the second group?



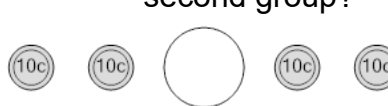
A	less	B	equals
C	greater		

5 Is the value of the first group less than, greater than, or equal to the second group?



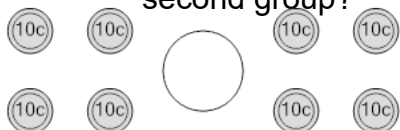
A	less	B	equals
C	greater		

6 Is the value of the first group less than, greater than, or equal to the second group?



A	less	B	equals
C	greater		

7 Is the value of the first group less than, greater than, or equal to the second group?



A	less	B	equals
C	greater		

8 Is the value of the first group less than, greater than, or equal to the second group?



A	less	B	equals
C	greater		