



## Coin Math - Less or Greater to Words - Pennies, Nickels



**1** Is the value of the first group less than, greater than, or equal to the second group?



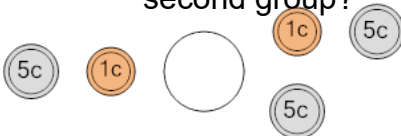
A	less	B	equals
C	greater		

**2** Is the value of the first group less than, greater than, or equal to the second group?



A	less	B	equals
C	greater		

**3** Is the value of the first group less than, greater than, or equal to the second group?



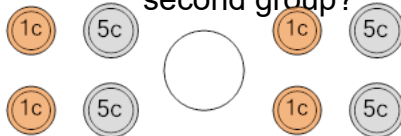
A	less	B	equals
C	greater		

**4** Is the value of the first group less than, greater than, or equal to the second group?




A	less	B	equals
C	greater		

**5** Is the value of the first group less than, greater than, or equal to the second group?



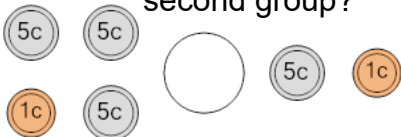
A	less	B	equals
C	greater		

**6** Is the value of the first group less than, greater than, or equal to the second group?




A	less	B	equals
C	greater		

**7** Is the value of the first group less than, greater than, or equal to the second group?



A	less	B	equals
C	greater		

**8** Is the value of the first group less than, greater than, or equal to the second group?



A	less	B	equals
C	greater		