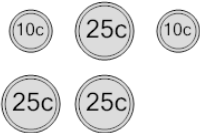
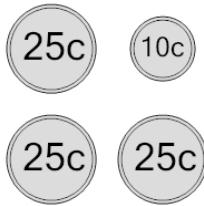

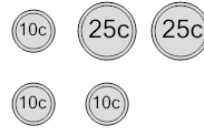








Coin Math - Count Total - Dimes and Quarters



1 What is the total value of these coins? 	A 85 cents	B 70 cents	2 What is the total value of these coins? 	A 86 cents	B 120 cents
	C 120 cents	D 95 cents		C 110 cents	D 135 cents
	E 121 cents	F 115 cents		E 60 cents	F 85 cents
3 What is the total value of these coins? 	A 105 cents	B 55 cents	4 What is the total value of these coins? 	A 100 cents	B 55 cents
	C 80 cents	D 90 cents		C 90 cents	D 86 cents
	E 70 cents	F 100 cents		E 80 cents	
5 What is the total value of these coins? 	A 170 cents	B 120 cents	6 What is the total value of these coins? 	A 60 cents	B 35 cents
	C 145 cents	D 95 cents		C 45 cents	D 25 cents
	E 110 cents				
7 What is the total value of these coins? 	A 125 cents	B 145 cents	8 What is the total value of these coins? 	A 90 cents	B 130 cents
	C 95 cents	D 120 cents		C 85 cents	D 80 cents
	E 70 cents	F 105 cents		E 105 cents	F 70 cents