
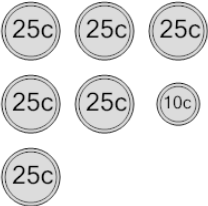
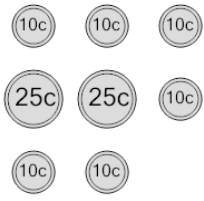



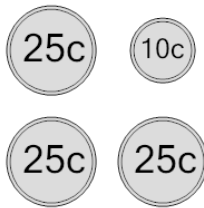
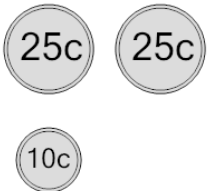
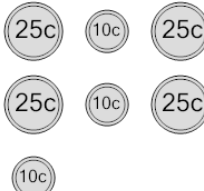




Coin Math - Count Total - Dimes and Quarters



1 What is the total value of these coins? 	A 210 cents C 160 cents E 186 cents	B 135 cents D 185 cents F 170 cents	2 What is the total value of these coins? 	A 135 cents C 145 cents E 120 cents	B 100 cents D 110 cents
3 What is the total value of these coins? 	A 70 cents C 55 cents E 80 cents	B 115 cents D 90 cents	4 What is the total value of these coins? 	A 82 cents C 115 cents E 70 cents	B 105 cents D 80 cents F 55 cents
5 What is the total value of these coins? 	A 230 cents C 211 cents E 235 cents	B 210 cents D 200 cents F 185 cents	6 What is the total value of these coins? 	A 85 cents C 75 cents E 60 cents	B 100 cents D 110 cents F 91 cents
7 What is the total value of these coins? 	A 70 cents C 110 cents E 85 cents	B 75 cents D 71 cents F 60 cents	8 What is the total value of these coins? 	A 155 cents C 140 cents E 150 cents	B 130 cents D 180 cents F 132 cents