





















<b>1</b> What is the total value of these coins?  	A 30 cents	B 20 cents	<b>2</b> What is the total value of these coins?   	A 55 cents	B 30 cents
	C 10 cents	D 12 cents		C 35 cents	D 10 cents
				E 20 cents	
<b>3</b> What is the total value of these coins?    	A 30 cents	B 20 cents	<b>4</b> What is the total value of these coins?   	A 10 cents	B 20 cents
	C 31 cents	D 50 cents		C 21 cents	D 40 cents
	E 40 cents			E 30 cents	
<b>5</b> What is the total value of these coins?    	A 50 cents	B 30 cents	<b>6</b> What is the total value of these coins?   	A 30 cents	B 35 cents
	C 20 cents	D 36 cents		C 55 cents	D 45 cents
	E 40 cents			E 20 cents	F 21 cents
<b>7</b> What is the total value of these coins?     	A 30 cents	B 40 cents	<b>8</b> What is the total value of these coins?    	A 35 cents	B 55 cents
	C 60 cents	D 50 cents		C 30 cents	D 50 cents
				E 40 cents	F 31 cents