



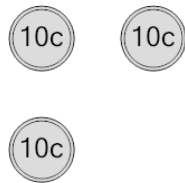

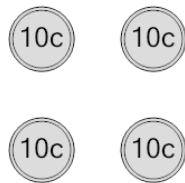



<b>1</b> What is the total value of these coins? 	A 80 cents	B 70 cents	<b>2</b> What is the total value of these coins? 	A 20 cents	B 10 cents
	C 40 cents	D 50 cents		C 30 cents	D 36 cents
	E 60 cents				
<b>3</b> What is the total value of these coins? 	A 50 cents	B 60 cents	<b>4</b> What is the total value of these coins? 	A 20 cents	B 10 cents
	C 70 cents	D 40 cents		C 35 cents	D 30 cents
	E 85 cents				
<b>5</b> What is the total value of these coins? 	A 56 cents	B 40 cents	<b>6</b> What is the total value of these coins? 	A 36 cents	B 30 cents
	C 55 cents	D 20 cents		C 20 cents	D 10 cents
	E 50 cents	F 30 cents			
<b>7</b> What is the total value of these coins? 	A 40 cents	B 46 cents	<b>8</b> What is the total value of these coins? 	A 50 cents	B 80 cents
	C 30 cents	D 60 cents		C 62 cents	D 60 cents
	E 50 cents	F 41 cents		E 70 cents	