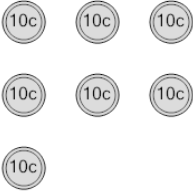









1 What is the total value of these coins? 	A 75 cents	B 80 cents	2 What is the total value of these coins? 	A 75 cents	B 50 cents
	C 70 cents	D 60 cents		C 70 cents	D 51 cents
				E 60 cents	F 40 cents
3 What is the total value of these coins? 	A 40 cents	B 30 cents	4 What is the total value of these coins? 	A 30 cents	B 10 cents
	C 41 cents	D 31 cents		C 20 cents	
	E 50 cents	F 20 cents			
5 What is the total value of these coins? 	A 90 cents	B 100 cents	6 What is the total value of these coins? 	A 60 cents	B 40 cents
	C 80 cents	D 96 cents		C 75 cents	D 80 cents
	E 91 cents			E 70 cents	F 50 cents
7 What is the total value of these coins? 	A 85 cents	B 90 cents	8 What is the total value of these coins? 	A 115 cents	B 95 cents
	C 60 cents	D 70 cents		C 90 cents	D 80 cents
	E 80 cents	F 72 cents		E 100 cents	F 125 cents