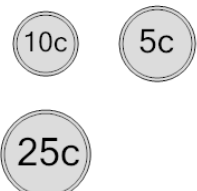
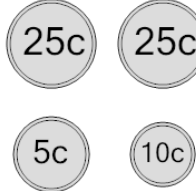
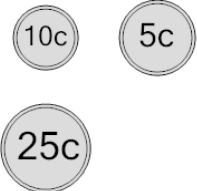
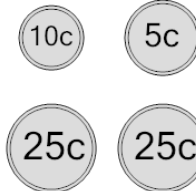
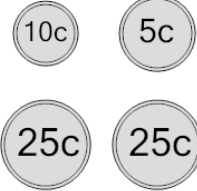
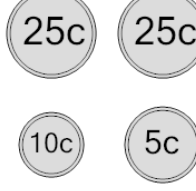
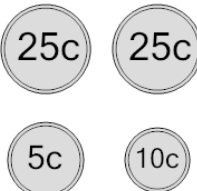
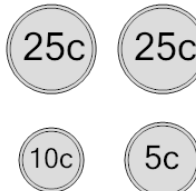




Coin Math - Count Total - Nickels, Dimes, Quarters



1 What is the total value of these coins? 	A 65 cents	B 15 cents	2 What is the total value of these coins? 	A 60 cents	B 70 cents
	C 30 cents	D 40 cents		C 66 cents	D 75 cents
	E 90 cents	F 55 cents		E 115 cents	F 65 cents
3 What is the total value of these coins? 	A 70 cents	B 65 cents	4 What is the total value of these coins? 	A 60 cents	B 85 cents
	C 50 cents	D 41 cents		C 90 cents	D 40 cents
	E 60 cents	F 40 cents		E 65 cents	F 70 cents
5 What is the total value of these coins? 	A 65 cents	B 40 cents	6 What is the total value of these coins? 	A 75 cents	B 65 cents
	C 75 cents	D 91 cents		C 90 cents	D 71 cents
	E 85 cents	F 115 cents		E 40 cents	F 55 cents
7 What is the total value of these coins? 	A 75 cents	B 65 cents	8 What is the total value of these coins? 	A 90 cents	B 60 cents
	C 40 cents	D 90 cents		C 66 cents	D 115 cents
	E 60 cents	F 55 cents		E 65 cents	F 40 cents