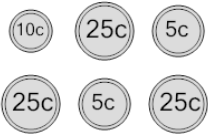
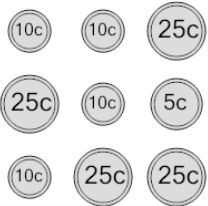
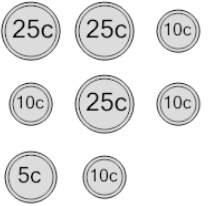
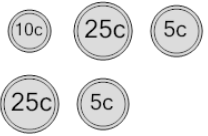
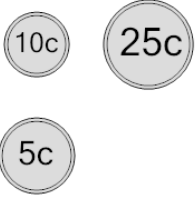
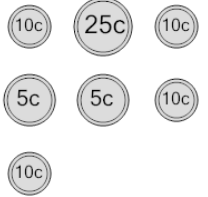
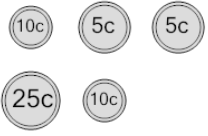
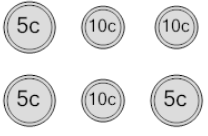




Coin Math - Count Total - Nickels, Dimes, Quarters



1 What is the total value of these coins? 	A 145 cents	B 95 cents	2 What is the total value of these coins? 	A 180 cents	B 155 cents
	C 96 cents	D 120 cents		C 145 cents	D 120 cents
	E 90 cents	F 70 cents		E 140 cents	F 135 cents
3 What is the total value of these coins? 	A 120 cents	B 131 cents	4 What is the total value of these coins? 	A 70 cents	B 65 cents
	C 125 cents	D 130 cents		C 75 cents	D 60 cents
	E 146 cents	F 115 cents		E 45 cents	
5 What is the total value of these coins? 	A 66 cents	B 40 cents	6 What is the total value of these coins? 	A 110 cents	B 75 cents
	C 50 cents	D 90 cents		C 80 cents	D 100 cents
	E 75 cents	F 15 cents		E 95 cents	F 65 cents
7 What is the total value of these coins? 	A 55 cents	B 50 cents	8 What is the total value of these coins? 	A 46 cents	B 56 cents
	C 45 cents	D 80 cents		C 55 cents	D 45 cents
	E 105 cents	F 56 cents		E 50 cents	F 71 cents