




























Coin Math - Count Total - Nickels and Dimes



1 What is the total value of these coins?   	A 60 cents	B 35 cents	2 What is the total value of these coins?  	A 15 cents	B 10 cents
	C 45 cents	D 20 cents		C 20 cents	D 40 cents
	E 25 cents	F 30 cents		E 50 cents	F 25 cents
3 What is the total value of these coins?  	A 25 cents	B 15 cents	4 What is the total value of these coins?   	A 35 cents	B 15 cents
	C 35 cents	D 10 cents		C 45 cents	D 30 cents
	E 5 cents	F 20 cents		E 25 cents	F 51 cents
5 What is the total value of these coins?    	A 50 cents	B 30 cents	6 What is the total value of these coins?  	A 15 cents	B 40 cents
	C 60 cents	D 35 cents		C 20 cents	D 5 cents
	E 25 cents	F 40 cents		E 25 cents	F 17 cents
7 What is the total value of these coins?    	A 40 cents	B 35 cents	8 What is the total value of these coins?    	A 30 cents	B 25 cents
	C 20 cents	D 30 cents		C 35 cents	D 40 cents
				E 50 cents	F 45 cents