
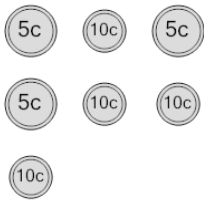
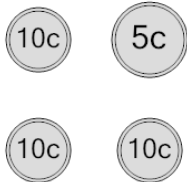
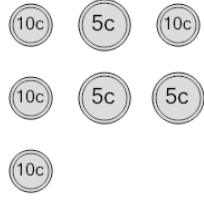
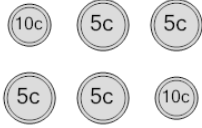
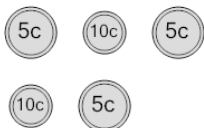
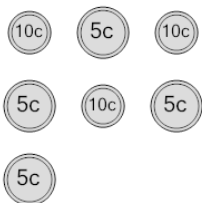
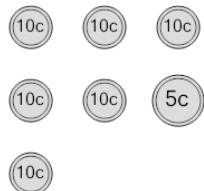
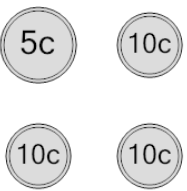




## Coin Math - Count Total - Nickels and Dimes



<b>1</b> What is the total value of these coins? 	A 50 cents	B 80 cents	<b>2</b> What is the total value of these coins? 	A 40 cents	B 55 cents
	C 65 cents	D 55 cents		C 46 cents	D 35 cents
	E 75 cents			E 45 cents	F 25 cents
<b>3</b> What is the total value of these coins? 	A 55 cents	B 65 cents	<b>4</b> What is the total value of these coins? 	A 45 cents	B 35 cents
	C 75 cents	D 60 cents		C 42 cents	D 40 cents
	E 50 cents	F 56 cents		E 66 cents	
<b>5</b> What is the total value of these coins? 	A 65 cents	B 35 cents	<b>6</b> What is the total value of these coins? 	A 75 cents	B 55 cents
	C 40 cents	D 30 cents		C 61 cents	D 60 cents
	E 36 cents	F 45 cents		E 40 cents	F 50 cents
<b>7</b> What is the total value of these coins? 	A 65 cents	B 85 cents	<b>8</b> What is the total value of these coins? 	A 45 cents	B 35 cents
	C 75 cents	D 60 cents		C 36 cents	D 30 cents
	E 55 cents			E 55 cents	F 25 cents