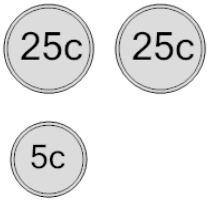
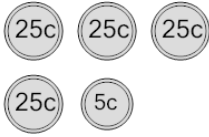
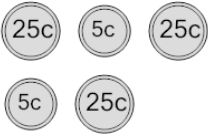


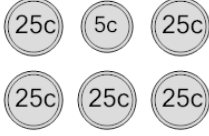






Coin Math - Count Total - Nickels and Quarters



1 What is the total value of these coins? 	A 80 cents	B 55 cents	2 What is the total value of these coins? 	A 155 cents	B 130 cents
	C 65 cents	D 50 cents		C 110 cents	D 80 cents
	E 60 cents			E 106 cents	F 105 cents
3 What is the total value of these coins? 	A 96 cents	B 80 cents	4 What is the total value of these coins? 	A 145 cents	B 85 cents
	C 86 cents	D 60 cents		C 110 cents	D 136 cents
	E 85 cents	F 110 cents		E 115 cents	F 120 cents
5 What is the total value of these coins? 	A 65 cents	B 75 cents	6 What is the total value of these coins? 	A 130 cents	B 155 cents
	C 105 cents	D 100 cents		C 141 cents	D 160 cents
	E 70 cents	F 81 cents		E 145 cents	F 180 cents
7 What is the total value of these coins? 	A 80 cents	B 85 cents	8 What is the total value of these coins? 	A 70 cents	B 55 cents
	C 105 cents	D 75 cents		C 60 cents	D 61 cents
	E 106 cents	F 55 cents		E 65 cents	F 35 cents