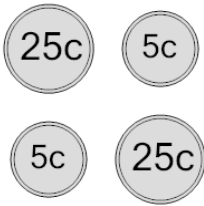
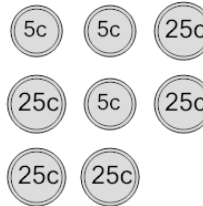

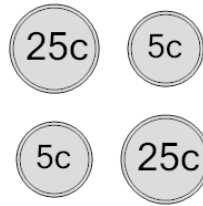
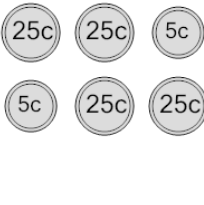
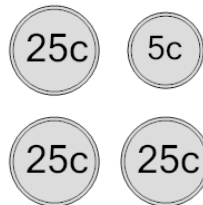
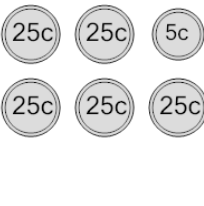
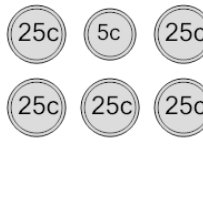




## Coin Math - Count Total - Nickels and Quarters



<b>1</b> What is the total value of these coins? 	A 55 cents	B 85 cents	<b>2</b> What is the total value of these coins? 	A 165 cents	B 135 cents
	C 35 cents	D 60 cents		C 175 cents	D 140 cents
	E 65 cents	F 110 cents		E 115 cents	F 155 cents
<b>3</b> What is the total value of these coins? 	A 190 cents	B 215 cents	<b>4</b> What is the total value of these coins? 	A 61 cents	B 65 cents
	C 175 cents	D 170 cents		C 70 cents	D 110 cents
	E 140 cents	F 165 cents		E 55 cents	F 60 cents
<b>5</b> What is the total value of these coins? 	A 160 cents	B 115 cents	<b>6</b> What is the total value of these coins? 	A 91 cents	B 55 cents
	C 85 cents	D 105 cents		C 105 cents	D 80 cents
	E 135 cents	F 110 cents		E 85 cents	F 90 cents
<b>7</b> What is the total value of these coins? 	A 130 cents	B 125 cents	<b>8</b> What is the total value of these coins? 	A 125 cents	B 140 cents
	C 160 cents	D 155 cents		C 105 cents	D 155 cents
	E 135 cents	F 105 cents		E 135 cents	F 130 cents