



Coin Math - Count Total - Nickels

**1**

What is the total value of these coins?



A

35 cents

B

25 cents

C

40 cents

D

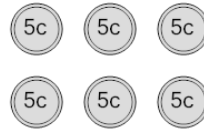
30 cents

E

65 cents

2

What is the total value of these coins?



A

35 cents

B

30 cents

C

65 cents

D

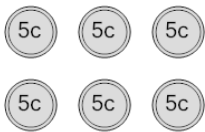
31 cents

E

80 cents

3

What is the total value of these coins?



A

30 cents

B

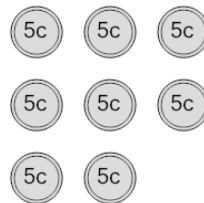
40 cents

C

25 cents

4

What is the total value of these coins?



A

46 cents

B

35 cents

C

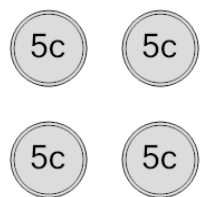
45 cents

D

40 cents

5

What is the total value of these coins?



A

25 cents

B

15 cents

C

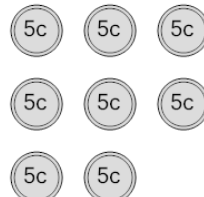
30 cents

D

20 cents

6

What is the total value of these coins?



A

45 cents

B

65 cents

C

55 cents

D

50 cents

E

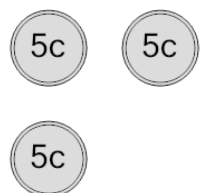
35 cents

F

40 cents

7

What is the total value of these coins?



A

10 cents

B

25 cents

C

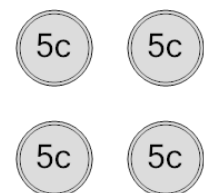
20 cents

D

15 cents

8

What is the total value of these coins?



A

20 cents

B

50 cents

C

25 cents

D

30 cents

E

15 cents