
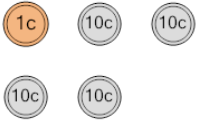
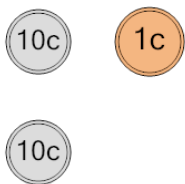
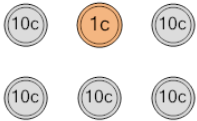
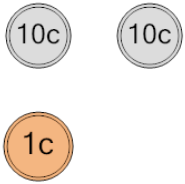
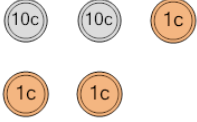
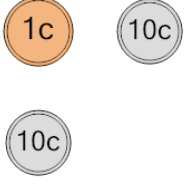

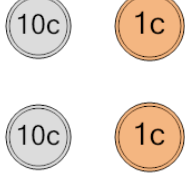




Coin Math - Count Total - Pennies and Dimes



1 What is the total value of these coins? 	A 40 cents	B 41 cents	2 What is the total value of these coins? 	A 31 cents	B 11 cents
	C 51 cents	D 31 cents		C 21 cents	D 20 cents
				E 41 cents	F 22 cents
3 What is the total value of these coins? 	A 51 cents	B 52 cents	4 What is the total value of these coins? 	A 20 cents	B 21 cents
	C 41 cents	D 53 cents		C 22 cents	D 31 cents
	E 61 cents	F 71 cents		E 11 cents	F 32 cents
5 What is the total value of these coins? 	A 28 cents	B 25 cents	6 What is the total value of these coins? 	A 21 cents	B 41 cents
	C 23 cents	D 33 cents		C 11 cents	D 31 cents
	E 24 cents	F 22 cents			
7 What is the total value of these coins? 	A 33 cents	B 22 cents	8 What is the total value of these coins? 	A 47 cents	B 32 cents
	C 34 cents	D 42 cents		C 23 cents	D 22 cents
	E 32 cents	F 57 cents		E 24 cents	F 27 cents