

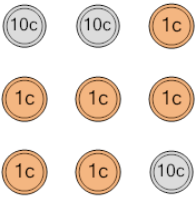
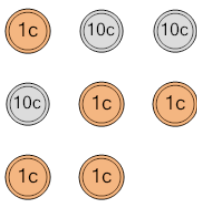
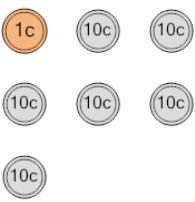
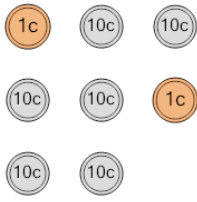
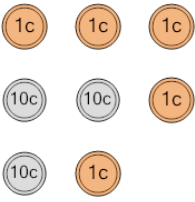
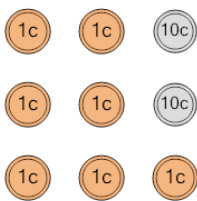
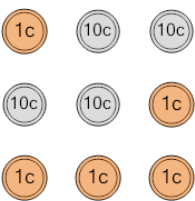




Coin Math - Count Total - Pennies and Dimes



1 What is the total value of these coins? 	A 10 cents C 11 cents E 12 cents	B 1 cents D 21 cents	2 What is the total value of these coins? 	A 38 cents C 56 cents E 37 cents	B 46 cents D 36 cents F 66 cents
3 What is the total value of these coins? 	A 35 cents C 40 cents E 36 cents	B 45 cents D 41 cents F 37 cents	4 What is the total value of these coins? 	A 111 cents C 51 cents E 61 cents	B 81 cents D 71 cents F 63 cents
5 What is the total value of these coins? 	A 61 cents C 72 cents E 52 cents	B 63 cents D 77 cents F 62 cents	6 What is the total value of these coins? 	A 65 cents C 36 cents E 50 cents	B 34 cents D 45 cents F 35 cents
7 What is the total value of these coins? 	A 37 cents C 38 cents E 26 cents	B 28 cents D 57 cents F 27 cents	8 What is the total value of these coins? 	A 60 cents C 71 cents E 45 cents	B 44 cents D 46 cents F 65 cents