






















## Coin Math - Count Total - Pennies, Nickels, Quarters



<b>1</b> What is the total value of these coins?    	A 32 cents	B 36 cents	<b>2</b> What is the total value of these coins?    	A 6 cents	B 30 cents
	C 6 cents	D 30 cents		C 36 cents	D 31 cents
	E 41 cents	F 31 cents		E 41 cents	F 56 cents
<b>3</b> What is the total value of these coins?    	A 56 cents	B 61 cents	<b>4</b> What is the total value of these coins?    	A 33 cents	B 30 cents
	C 31 cents	D 36 cents		C 32 cents	D 41 cents
	E 6 cents	F 32 cents		E 31 cents	F 61 cents
<b>5</b> What is the total value of these coins?     	A 56 cents	B 106 cents	<b>6</b> What is the total value of these coins?    	A 81 cents	B 32 cents
	C 91 cents	D 76 cents		C 36 cents	D 57 cents
	E 61 cents	F 81 cents		E 31 cents	F 37 cents