
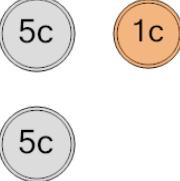

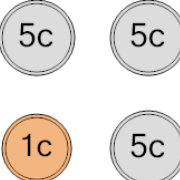
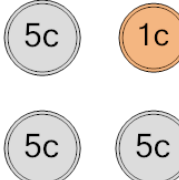

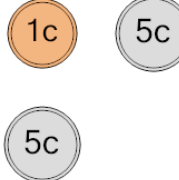






Coin Math - Count Total - Pennies and Nickels



1 What is the total value of these coins? 	A 26 cents	B 13 cents	2 What is the total value of these coins? 	A 5 cents	B 6 cents
	C 6 cents	D 12 cents		C 11 cents	D 7 cents
	E 46 cents	F 11 cents		E 16 cents	
3 What is the total value of these coins? 	A 16 cents	B 11 cents	4 What is the total value of these coins? 	A 21 cents	B 16 cents
	C 26 cents	D 21 cents		C 11 cents	D 17 cents
	E 15 cents				
5 What is the total value of these coins? 	A 7 cents	B 11 cents	6 What is the total value of these coins? 	A 21 cents	B 22 cents
	C 31 cents	D 6 cents		C 26 cents	D 12 cents
	E 1 cents	F 17 cents		E 16 cents	F 11 cents
7 What is the total value of these coins? 	A 11 cents	B 32 cents	8 What is the total value of these coins? 	A 5 cents	B 11 cents
	C 5 cents	D 8 cents		C 32 cents	D 7 cents
	E 6 cents			E 6 cents	F 31 cents