
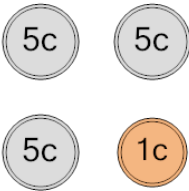
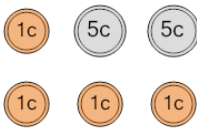
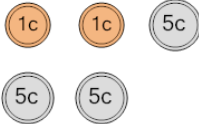
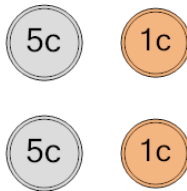
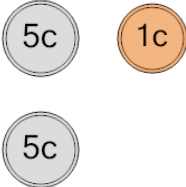


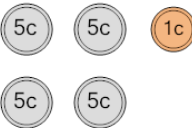




## Coin Math - Count Total - Pennies and Nickels



|  |               |               |   |               |               |
|--|---------------|---------------|---|---------------|---------------|
| <b>1</b><br>What is the total value of these coins?<br><br>   | A<br>21 cents | B<br>42 cents | <b>2</b><br>What is the total value of these coins?<br><br>   | A<br>13 cents | B<br>15 cents |
|  | C<br>15 cents | D<br>26 cents |   | C<br>14 cents | D<br>19 cents |
|  | E<br>16 cents |               |   | E<br>39 cents | F<br>16 cents |
| <b>3</b><br>What is the total value of these coins?<br><br>   | A<br>16 cents | B<br>28 cents | <b>4</b><br>What is the total value of these coins?<br><br>  | A<br>11 cents | B<br>7 cents  |
|  | C<br>18 cents | D<br>12 cents |   | C<br>17 cents | D<br>12 cents |
|  | E<br>23 cents | F<br>17 cents |   | E<br>14 cents | F<br>13 cents |
| <b>5</b><br>What is the total value of these coins?<br><br> | A<br>11 cents | B<br>13 cents | <b>6</b><br>What is the total value of these coins?<br><br> | A<br>28 cents | B<br>13 cents |
|  | C<br>6 cents  | D<br>21 cents |   | C<br>14 cents | D<br>8 cents  |
|  | E<br>16 cents |               |   | E<br>15 cents | F<br>12 cents |
| <b>7</b><br>What is the total value of these coins?<br><br> | A<br>48 cents | B<br>13 cents | <b>8</b><br>What is the total value of these coins?<br><br> | A<br>16 cents | B<br>20 cents |
|  | C<br>14 cents | D<br>43 cents |   | C<br>21 cents | D<br>46 cents |
|  | E<br>8 cents  | F<br>12 cents |   | E<br>22 cents | F<br>31 cents |