
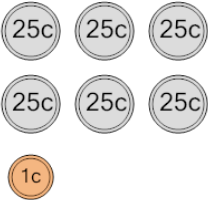
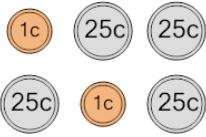
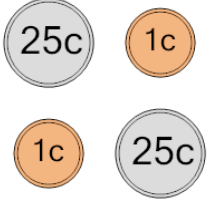
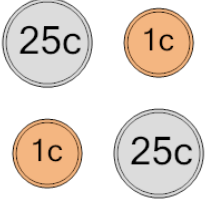

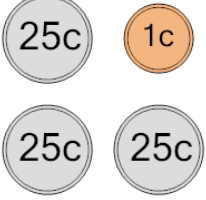
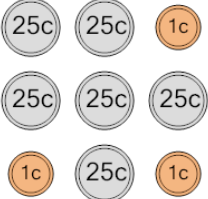





Coin Math - Count Total - Pennies and Quarters



1 What is the total value of these coins? 	A 126 cents	B 150 cents	2 What is the total value of these coins? 	A 77 cents	B 104 cents
	C 176 cents	D 151 cents		C 127 cents	D 103 cents
	E 152 cents			E 132 cents	F 102 cents
3 What is the total value of these coins? 	A 62 cents	B 52 cents	4 What is the total value of these coins? 	A 51 cents	B 53 cents
	C 72 cents	D 53 cents		C 77 cents	D 54 cents
	E 77 cents	F 27 cents		E 27 cents	F 52 cents
5 What is the total value of these coins? 	A 63 cents	B 52 cents	6 What is the total value of these coins? 	A 77 cents	B 76 cents
	C 78 cents	D 103 cents		C 81 cents	D 101 cents
	E 53 cents	F 54 cents		E 82 cents	F 78 cents
7 What is the total value of these coins? 	A 178 cents	B 203 cents	8 What is the total value of these coins? 	A 126 cents	B 136 cents
	C 153 cents	D 152 cents		C 151 cents	D 101 cents
	E 155 cents	F 128 cents		E 125 cents	F 176 cents