
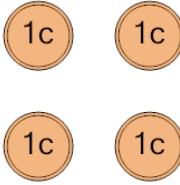
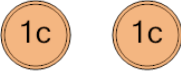
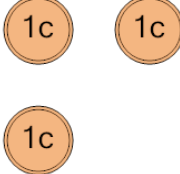
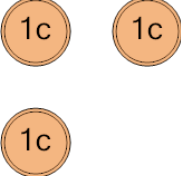





<b>1</b> What is the total value of these coins?  	A 2 cents	B 51 cents	<b>2</b> What is the total value of these coins?  	A 29 cents	B 15 cents
	C 1 cents			C 4 cents	D 5 cents
				E 3 cents	
<b>3</b> What is the total value of these coins?  	A 13 cents	B 28 cents	<b>4</b> What is the total value of these coins?  	A 3 cents	B 4 cents
	C 1 cents	D 2 cents		C 8 cents	
<b>5</b> What is the total value of these coins?  	A 3 cents	B 2 cents	<b>6</b> What is the total value of these coins?  	A 6 cents	B 3 cents
	C 4 cents	D 9 cents		C 2 cents	D 21 cents
	E 5 cents	F 13 cents		E 1 cents	
<b>7</b> What is the total value of these coins?  	A 16 cents	B 36 cents	<b>8</b> What is the total value of these coins?  	A 11 cents	B 1 cents
	C 2 cents	D 1 cents		C 3 cents	D 2 cents
	E 12 cents				