





Coin Math - Count Total - Pennies

**1**

What is the total value of these coins?



A

1 cents

B

2 cents

C

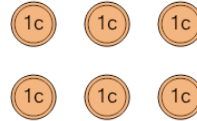
3 cents

D

12 cents

2

What is the total value of these coins?



A

8 cents

B

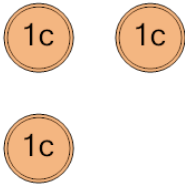
6 cents

C

5 cents

3

What is the total value of these coins?



A

3 cents

B

8 cents

C

2 cents

D

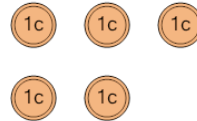
5 cents

E

4 cents

4

What is the total value of these coins?



A

5 cents

B

10 cents

C

15 cents

D

7 cents

E

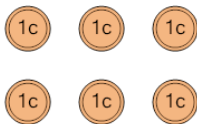
4 cents

F

6 cents

5

What is the total value of these coins?



A

7 cents

B

16 cents

C

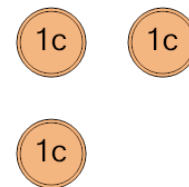
5 cents

D

6 cents

6

What is the total value of these coins?



A

4 cents

B

2 cents

C

13 cents

D

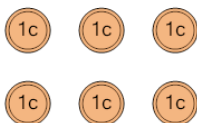
3 cents

E

8 cents

7

What is the total value of these coins?



A

36 cents

B

8 cents

C

6 cents

D

11 cents

E

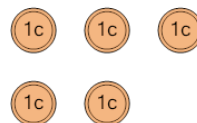
7 cents

F

16 cents

8

What is the total value of these coins?



A

5 cents

B

31 cents

C

4 cents

D

10 cents

E

6 cents