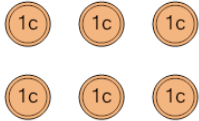


**1**

What is the total value of these coins?



A

16 cents

B

6 cents

C

7 cents

D

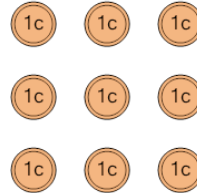
8 cents

E

5 cents

**2**

What is the total value of these coins?



A

8 cents

B

39 cents

C

34 cents

D

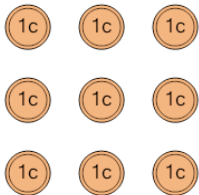
10 cents

E

9 cents

**3**

What is the total value of these coins?



A

14 cents

B

35 cents

C

9 cents

D

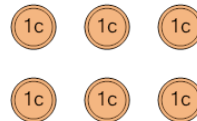
8 cents

E

11 cents

**4**

What is the total value of these coins?



A

8 cents

B

31 cents

C

5 cents

D

6 cents

E

7 cents

**5**

What is the total value of these coins?



A

3 cents

B

12 cents

C

4 cents

D

1 cents

E

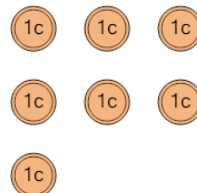
28 cents

F

2 cents

**6**

What is the total value of these coins?



A

18 cents

B

6 cents

C

8 cents

D

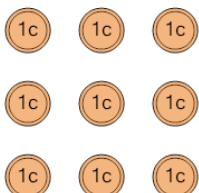
7 cents

E

17 cents

**7**

What is the total value of these coins?



A

44 cents

B

10 cents

C

34 cents

D

9 cents

E

8 cents

F

59 cents

**8**

What is the total value of these coins?



A

1 cents

B

3 cents

C

2 cents

D

12 cents

E

4 cents