






















Coin Math - Count Total - Quarters



1 What is the total value of these coins? 	A 35 cents	B 75 cents	2 What is the total value of these coins? 	A 75 cents	B 45 cents
	C 25 cents	D 50 cents		C 25 cents	D 50 cents
3 What is the total value of these coins?    	A 75 cents	B 100 cents	4 What is the total value of these coins? 	A 25 cents	B 75 cents
	C 125 cents	D 126 cents		C 60 cents	D 35 cents
				E 50 cents	F 27 cents
5 What is the total value of these coins?  	A 100 cents	B 51 cents	6 What is the total value of these coins?  	A 100 cents	B 75 cents
	C 75 cents	D 80 cents		C 25 cents	D 50 cents
	E 25 cents	F 50 cents		E 60 cents	
7 What is the total value of these coins?    	A 105 cents	B 125 cents	8 What is the total value of these coins?   	A 125 cents	B 110 cents
	C 75 cents	D 100 cents		C 76 cents	D 100 cents
	E 150 cents			E 75 cents	