
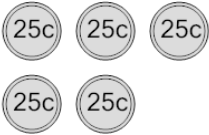




Coin Math - Count Total - Quarters

**1**

What is the total value of these coins?



A

150 cents

B

175 cents

C

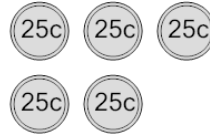
100 cents

D

125 cents

2

What is the total value of these coins?



A

125 cents

B

175 cents

C

140 cents

D

155 cents

E


100 cents

F

150 cents

3

What is the total value of these coins?



A

90 cents

B

101 cents

C

76 cents

D

75 cents

E

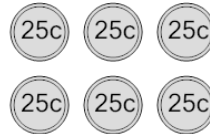
100 cents

F

50 cents

4

What is the total value of these coins?



A

150 cents

B

125 cents

C

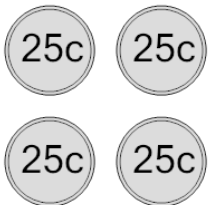
175 cents

D

200 cents

5

What is the total value of these coins?



A

75 cents

B

150 cents

C

125 cents

D

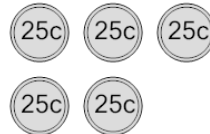
100 cents

E

110 cents

6

What is the total value of these coins?



A

135 cents

B

125 cents

C

100 cents

D

150 cents

E

126 cents

7

What is the total value of these coins?



A

100 cents

B

76 cents

C

55 cents

D

50 cents

E

85 cents

F

25 cents

8

What is the total value of these coins?



A

125 cents

B

150 cents

C

135 cents

D

100 cents

E

126 cents