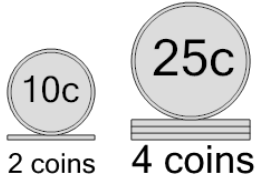




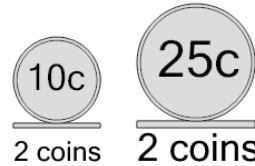
Coin Math - Count Piles - Dimes and Quarters

1 What is the total value of these stacks of coins?



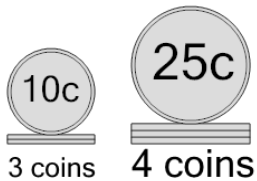
A	95 cents	B	120 cents
C	130 cents	D	145 cents
E	110 cents		

2 What is the total value of these stacks of coins?



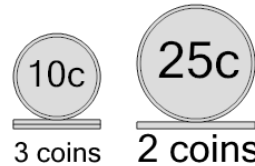
A	105 cents	B	70 cents
C	60 cents	D	85 cents
E	95 cents	F	75 cents

3 What is the total value of these stacks of coins?



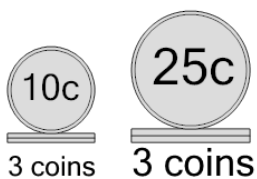
A	136 cents	B	155 cents
C	150 cents	D	130 cents
E	120 cents	F	135 cents

4 What is the total value of these stacks of coins?



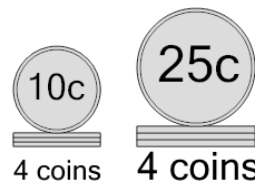
A	80 cents	B	70 cents
C	55 cents	D	105 cents
E	100 cents		

5 What is the total value of these stacks of coins?



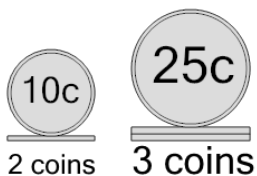
A	80 cents	B	130 cents
C	105 cents	D	95 cents
E	155 cents		

6 What is the total value of these stacks of coins?



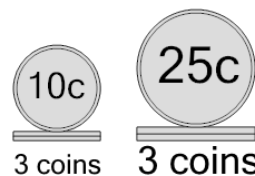
A	150 cents	B	140 cents
C	165 cents	D	160 cents
E	115 cents	F	130 cents

7 What is the total value of these stacks of coins?



A	95 cents	B	115 cents
C	70 cents	D	130 cents
E	105 cents	F	120 cents

8 What is the total value of these stacks of coins?



A	155 cents	B	125 cents
C	80 cents	D	131 cents
E	105 cents	F	115 cents