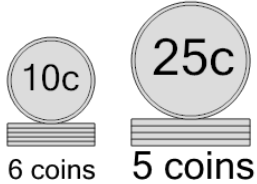


Coin Math - Count Piles - Dimes and Quarters

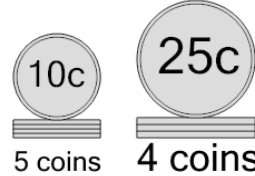
1 What is the total value of these stacks of coins?



A 175 cents B 210 cents

C 160 cents D 185 cents

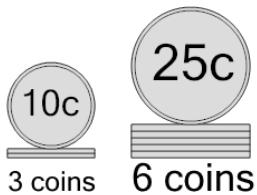
2 What is the total value of these stacks of coins?



A 151 cents B 125 cents

C 200 cents D 150 cents

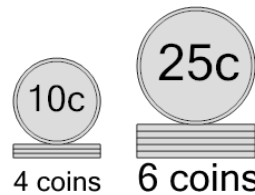
3 What is the total value of these stacks of coins?



A 180 cents B 205 cents

C 170 cents D 190 cents

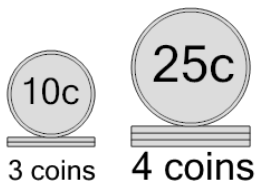
4 What is the total value of these stacks of coins?



A 190 cents B 180 cents

C 215 cents D 165 cents

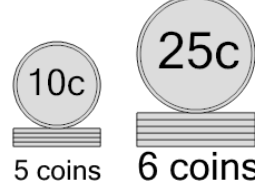
5 What is the total value of these stacks of coins?



A 130 cents B 140 cents

C 105 cents D 120 cents

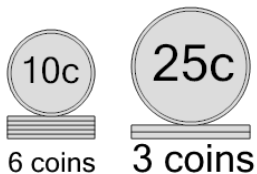
6 What is the total value of these stacks of coins?



A 220 cents B 175 cents

C 200 cents D 250 cents

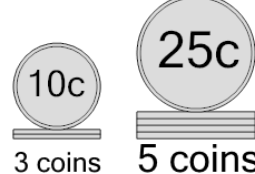
7 What is the total value of these stacks of coins?



A 125 cents B 140 cents

C 110 cents D 155 cents

8 What is the total value of these stacks of coins?



A 145 cents B 130 cents

C 165 cents D 155 cents

E 150 cents F 135 cents

E 180 cents