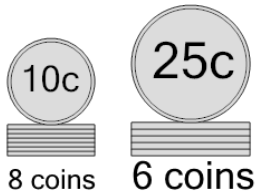




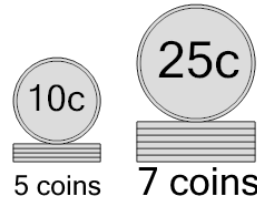
Coin Math - Count Piles - Dimes and Quarters

1 What is the total value of these stacks of coins?



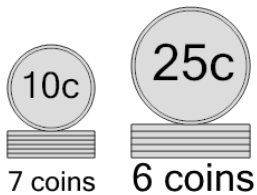
- | | |
|----------------|----------------|
| A
230 cents | B
231 cents |
| C
240 cents | D
255 cents |
| E
236 cents | F
205 cents |

2 What is the total value of these stacks of coins?



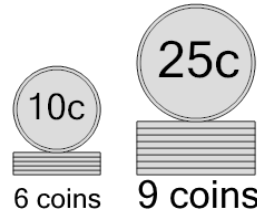
- | | |
|----------------|----------------|
| A
275 cents | B
200 cents |
| C
215 cents | D
250 cents |
| E
245 cents | F
225 cents |

3 What is the total value of these stacks of coins?



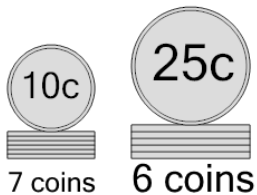
- | | |
|----------------|----------------|
| A
245 cents | B
220 cents |
| C
230 cents | D
210 cents |
| E
225 cents | F
240 cents |

4 What is the total value of these stacks of coins?



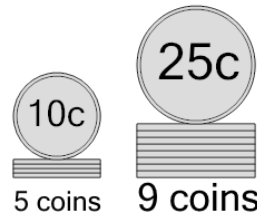
- | | |
|----------------|----------------|
| A
275 cents | B
310 cents |
| C
286 cents | D
300 cents |
| E
260 cents | F
285 cents |

5 What is the total value of these stacks of coins?



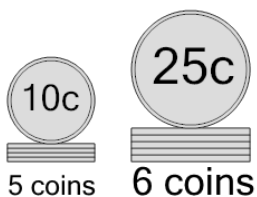
- | | |
|----------------|----------------|
| A
220 cents | B
240 cents |
| C
250 cents | D
230 cents |
| E
231 cents | F
270 cents |

6 What is the total value of these stacks of coins?



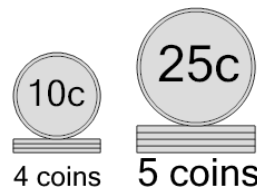
- | | |
|----------------|----------------|
| A
295 cents | B
300 cents |
| C
275 cents | D
285 cents |
| E
250 cents | F
265 cents |

7 What is the total value of these stacks of coins?



- | | |
|----------------|----------------|
| A
210 cents | B
225 cents |
| C
190 cents | D
200 cents |
| E
220 cents | F
201 cents |

8 What is the total value of these stacks of coins?



- | | |
|----------------|----------------|
| A
176 cents | B
166 cents |
| C
190 cents | D
165 cents |
| E
175 cents | F
215 cents |