


1 What is the total value of this stack of coins?



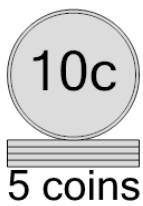
A	60 cents	B	50 cents
C	70 cents	D	85 cents

2 What is the total value of this stack of coins?



A	46 cents	B	45 cents
C	30 cents	D	65 cents
E	40 cents	F	50 cents

3 What is the total value of this stack of coins?



A	40 cents	B	55 cents
C	50 cents	D	60 cents
E	70 cents		

4 What is the total value of this stack of coins?



A	20 cents	B	30 cents
C	31 cents	D	40 cents
E	50 cents		

5 What is the total value of this stack of coins?




A	65 cents	B	80 cents
C	50 cents	D	71 cents
E	60 cents	F	70 cents

6 What is the total value of this stack of coins?



A	50 cents	B	75 cents
C	55 cents	D	40 cents
E	60 cents		

7 What is the total value of this stack of coins?



A	20 cents	B	45 cents
C	35 cents	D	30 cents
E	40 cents	F	36 cents

8 What is the total value of this stack of coins?



A	60 cents	B	80 cents
C	70 cents	D	50 cents