
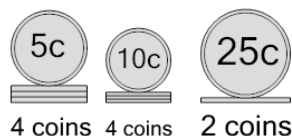




## Coin Math - Count Piles - Nickels, Dimes, Quarters

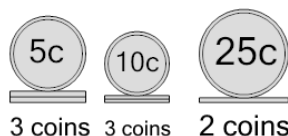


**1** What is the total value of these stacks of coins?



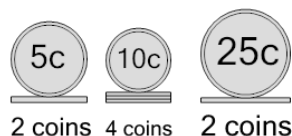
- |                |                |
|----------------|----------------|
| A<br>105 cents | B<br>110 cents |
| C<br>121 cents | D<br>115 cents |
| E<br>100 cents | F<br>120 cents |

**2** What is the total value of these stacks of coins?



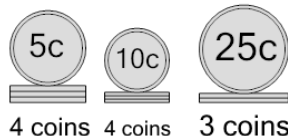
- |                |                |
|----------------|----------------|
| A<br>100 cents | B<br>110 cents |
| C<br>95 cents  | D<br>85 cents  |
| E<br>120 cents | F<br>105 cents |

**3** What is the total value of these stacks of coins?



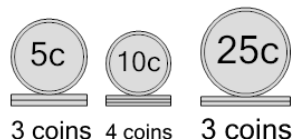
- |                |                |
|----------------|----------------|
| A<br>100 cents | B<br>101 cents |
| C<br>90 cents  | D<br>105 cents |
| E<br>110 cents | F<br>95 cents  |

**4** What is the total value of these stacks of coins?



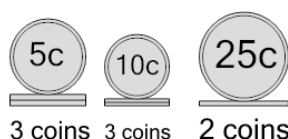
- |                |                |
|----------------|----------------|
| A<br>185 cents | B<br>161 cents |
| C<br>135 cents | D<br>125 cents |
| E<br>145 cents | F<br>155 cents |

**5** What is the total value of these stacks of coins?



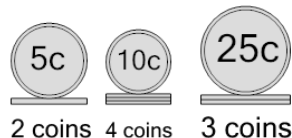
- |                |                |
|----------------|----------------|
| A<br>155 cents | B<br>141 cents |
| C<br>105 cents | D<br>130 cents |
| E<br>165 cents |                |

**6** What is the total value of these stacks of coins?



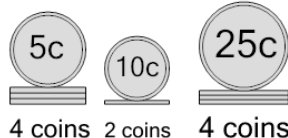
- |                |               |
|----------------|---------------|
| A<br>105 cents | B<br>95 cents |
| C<br>100 cents | D<br>96 cents |
| E<br>145 cents | F<br>90 cents |

**7** What is the total value of these stacks of coins?



- |                |                |
|----------------|----------------|
| A<br>150 cents | B<br>140 cents |
| C<br>131 cents | D<br>115 cents |
| E<br>135 cents | F<br>125 cents |

**8** What is the total value of these stacks of coins?



- |                |                |
|----------------|----------------|
| A<br>115 cents | B<br>141 cents |
| C<br>190 cents | D<br>150 cents |
| E<br>140 cents | F<br>145 cents |