



























Coin Math - Count Piles - Nickels, Dimes, Quarters



| | | | | | |
|--|--|--|---|--|--|
| <p>1 What is the total value of these stacks of coins?</p> <div style="display: flex; justify-content: space-around; align-items: center;"> <div style="text-align: center;">  3 coins </div> <div style="text-align: center;">  4 coins </div> <div style="text-align: center;">  5 coins </div> </div> | <p>A 210 cents</p> <p>C 190 cents</p> <p>E 155 cents</p> | <p>B 180 cents</p> <p>D 205 cents</p> <p>F 170 cents</p> | <p>2 What is the total value of these stacks of coins?</p> <div style="display: flex; justify-content: space-around; align-items: center;"> <div style="text-align: center;">  4 coins </div> <div style="text-align: center;">  4 coins </div> <div style="text-align: center;">  6 coins </div> </div> | <p>A 220 cents</p> <p>C 235 cents</p> <p>E 210 cents</p> | <p>B 200 cents</p> <p>D 230 cents</p> <p>F 185 cents</p> |
| <p>3 What is the total value of these stacks of coins?</p> <div style="display: flex; justify-content: space-around; align-items: center;"> <div style="text-align: center;">  4 coins </div> <div style="text-align: center;">  4 coins </div> <div style="text-align: center;">  3 coins </div> </div> | <p>A 170 cents</p> <p>C 130 cents</p> <p>E 135 cents</p> | <p>B 145 cents</p> <p>D 140 cents</p> <p>F 185 cents</p> | <p>4 What is the total value of these stacks of coins?</p> <div style="display: flex; justify-content: space-around; align-items: center;"> <div style="text-align: center;">  3 coins </div> <div style="text-align: center;">  6 coins </div> <div style="text-align: center;">  4 coins </div> </div> | <p>A 185 cents</p> <p>C 175 cents</p> <p>E 210 cents</p> | <p>B 200 cents</p> <p>D 150 cents</p> <p>F 195 cents</p> |
| <p>5 What is the total value of these stacks of coins?</p> <div style="display: flex; justify-content: space-around; align-items: center;"> <div style="text-align: center;">  3 coins </div> <div style="text-align: center;">  5 coins </div> <div style="text-align: center;">  3 coins </div> </div> | <p>A 145 cents</p> <p>C 165 cents</p> <p>E 160 cents</p> | <p>B 150 cents</p> <p>D 155 cents</p> <p>F 140 cents</p> | <p>6 What is the total value of these stacks of coins?</p> <div style="display: flex; justify-content: space-around; align-items: center;"> <div style="text-align: center;">  6 coins </div> <div style="text-align: center;">  4 coins </div> <div style="text-align: center;">  5 coins </div> </div> | <p>A 220 cents</p> <p>C 195 cents</p> | <p>B 205 cents</p> <p>D 200 cents</p> |
| <p>7 What is the total value of these stacks of coins?</p> <div style="display: flex; justify-content: space-around; align-items: center;"> <div style="text-align: center;">  6 coins </div> <div style="text-align: center;">  5 coins </div> <div style="text-align: center;">  4 coins </div> </div> | <p>A 180 cents</p> <p>C 155 cents</p> <p>E 230 cents</p> | <p>B 175 cents</p> <p>D 185 cents</p> <p>F 200 cents</p> | <p>8 What is the total value of these stacks of coins?</p> <div style="display: flex; justify-content: space-around; align-items: center;"> <div style="text-align: center;">  6 coins </div> <div style="text-align: center;">  5 coins </div> <div style="text-align: center;">  5 coins </div> </div> | <p>A 195 cents</p> <p>C 205 cents</p> <p>E 215 cents</p> | <p>B 200 cents</p> <p>D 255 cents</p> <p>F 230 cents</p> |