
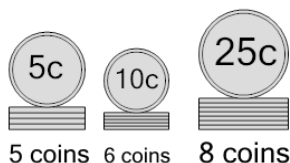




## Coin Math - Count Piles - Nickels, Dimes, Quarters

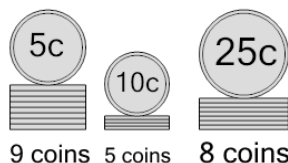


**1** What is the total value of these stacks of coins?



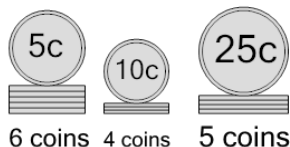
- |                |                |
|----------------|----------------|
| A<br>295 cents | B<br>275 cents |
| C<br>335 cents | D<br>260 cents |
| E<br>285 cents | F<br>310 cents |

**2** What is the total value of these stacks of coins?



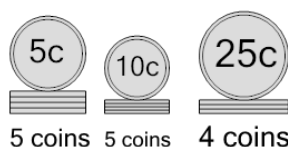
- |                |                |
|----------------|----------------|
| A<br>285 cents | B<br>290 cents |
| C<br>270 cents | D<br>300 cents |
| E<br>306 cents | F<br>295 cents |

**3** What is the total value of these stacks of coins?



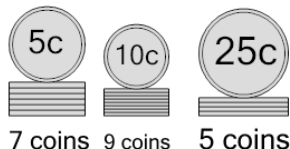
- |                |                |
|----------------|----------------|
| A<br>190 cents | B<br>197 cents |
| C<br>185 cents | D<br>195 cents |
| E<br>205 cents | F<br>170 cents |

**4** What is the total value of these stacks of coins?



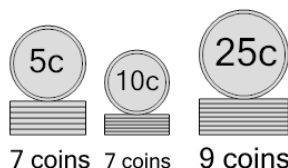
- |                |                |
|----------------|----------------|
| A<br>205 cents | B<br>225 cents |
| C<br>180 cents | D<br>195 cents |
| E<br>185 cents | F<br>175 cents |

**5** What is the total value of these stacks of coins?



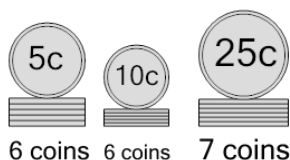
- |                |                |
|----------------|----------------|
| A<br>260 cents | B<br>250 cents |
| C<br>245 cents | D<br>255 cents |
| E<br>261 cents | F<br>225 cents |

**6** What is the total value of these stacks of coins?



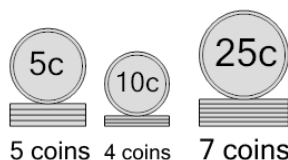
- |                |                |
|----------------|----------------|
| A<br>340 cents | B<br>355 cents |
| C<br>350 cents | D<br>320 cents |
| E<br>305 cents | F<br>330 cents |

**7** What is the total value of these stacks of coins?



- |                |                |
|----------------|----------------|
| A<br>290 cents | B<br>260 cents |
| C<br>265 cents | D<br>275 cents |
| E<br>270 cents | F<br>276 cents |

**8** What is the total value of these stacks of coins?



- |                |                |
|----------------|----------------|
| A<br>275 cents | B<br>250 cents |
| C<br>240 cents | D<br>215 cents |
| E<br>265 cents | F<br>290 cents |