
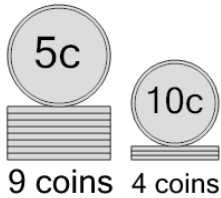




## Coin Math - Count Piles - Nickels and Dimes

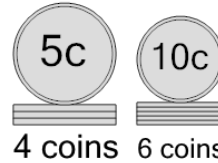


**1** What is the total value of these stacks of coins?



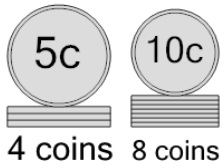
A	91 cents	B	115 cents
C	95 cents	D	90 cents
E	85 cents	F	86 cents

**2** What is the total value of these stacks of coins?



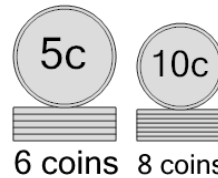
A	85 cents	B	90 cents
C	106 cents	D	80 cents

**3** What is the total value of these stacks of coins?



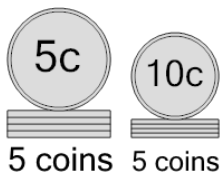
A	110 cents	B	100 cents
C	101 cents	D	90 cents
E	111 cents	F	105 cents

**4** What is the total value of these stacks of coins?



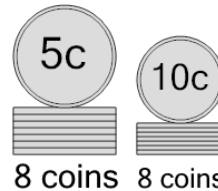
A	110 cents	B	135 cents
C	115 cents	D	100 cents
E	120 cents		

**5** What is the total value of these stacks of coins?



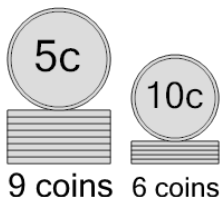
A	80 cents	B	75 cents
C	70 cents	D	65 cents
E	85 cents	F	95 cents

**6** What is the total value of these stacks of coins?



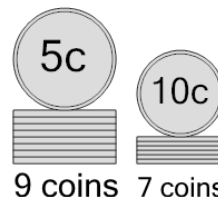
A	130 cents	B	126 cents
C	140 cents	D	125 cents
E	115 cents	F	120 cents

**7** What is the total value of these stacks of coins?



A	106 cents	B	105 cents
C	110 cents	D	107 cents
E	120 cents	F	115 cents

**8** What is the total value of these stacks of coins?



A	110 cents	B	125 cents
C	126 cents	D	145 cents
E	115 cents		