
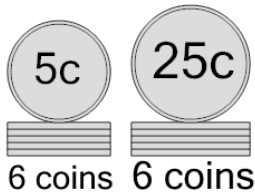




Coin Math - Count Piles - Nickels and Quarters

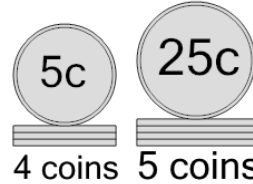


1 What is the total value of these stacks of coins?



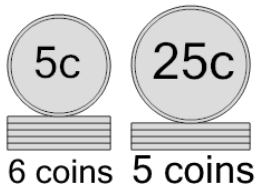
- | | |
|----------------|----------------|
| A
185 cents | B
180 cents |
| C
155 cents | D
230 cents |
| E
175 cents | F
205 cents |

2 What is the total value of these stacks of coins?



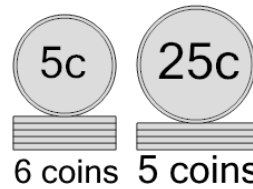
- | | |
|----------------|----------------|
| A
140 cents | B
145 cents |
| C
170 cents | D
120 cents |
| E
160 cents | F
150 cents |

3 What is the total value of these stacks of coins?



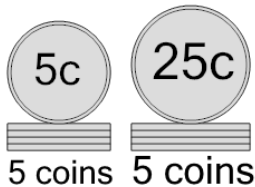
- | | |
|----------------|----------------|
| A
170 cents | B
155 cents |
| C
150 cents | D
165 cents |

4 What is the total value of these stacks of coins?



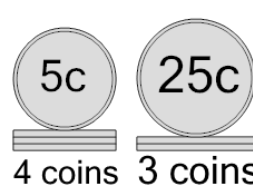
- | | |
|----------------|----------------|
| A
205 cents | B
165 cents |
| C
155 cents | D
160 cents |
| E
170 cents | F
130 cents |

5 What is the total value of these stacks of coins?



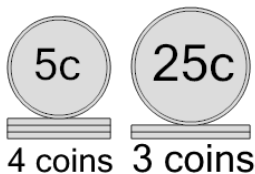
- | | |
|----------------|----------------|
| A
160 cents | B
175 cents |
| C
150 cents | D
145 cents |

6 What is the total value of these stacks of coins?



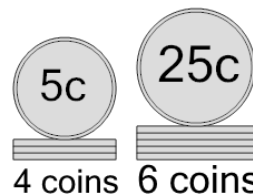
- | | |
|----------------|---------------|
| A
95 cents | B
90 cents |
| C
120 cents | D
70 cents |
| E
100 cents | |

7 What is the total value of these stacks of coins?



- | | |
|----------------|----------------|
| A
120 cents | B
145 cents |
| C
96 cents | D
95 cents |
| E
90 cents | F
125 cents |

8 What is the total value of these stacks of coins?



- | | |
|----------------|----------------|
| A
220 cents | B
172 cents |
| C
195 cents | D
180 cents |
| E
165 cents | F
170 cents |