




1 What is the total value of this stack of coins?




A	40 cents	B	30 cents
C	25 cents	D	51 cents
E	35 cents		

2 What is the total value of this stack of coins?



A	20 cents	B	15 cents
C	25 cents	D	30 cents

3 What is the total value of this stack of coins?



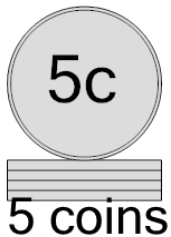
A	30 cents	B	20 cents
C	35 cents	D	25 cents
E	15 cents	F	40 cents

4 What is the total value of this stack of coins?



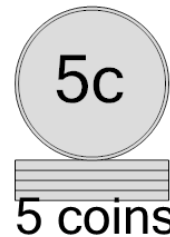
A	30 cents	B	10 cents
C	41 cents	D	15 cents
E	40 cents	F	20 cents

5 What is the total value of this stack of coins?




A	30 cents	B	31 cents
C	20 cents	D	35 cents
E	25 cents		

6 What is the total value of this stack of coins?



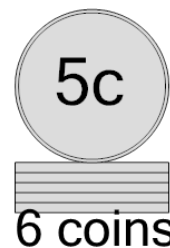
A	30 cents	B	55 cents
C	35 cents	D	20 cents
E	25 cents		

7 What is the total value of this stack of coins?



A	30 cents	B	35 cents
C	60 cents	D	25 cents

8 What is the total value of this stack of coins?



A	25 cents	B	30 cents
C	31 cents	D	40 cents
E	45 cents		