

















Coin Math - Count Piles - Pennies, Dimes, Quarters



<p>1 What is the total value of these stacks of coins?</p> <div style="display: flex; justify-content: space-around; align-items: center;"> <div style="text-align: center;">  2 coins </div> <div style="text-align: center;">  2 coins </div> <div style="text-align: center;">  4 coins </div> </div>	<p>A 147 cents</p> <p>C 122 cents</p> <p>E 132 cents</p>	<p>B 157 cents</p> <p>D 123 cents</p> <p>F 97 cents</p>	<p>2 What is the total value of these stacks of coins?</p> <div style="display: flex; justify-content: space-around; align-items: center;"> <div style="text-align: center;">  2 coins </div> <div style="text-align: center;">  3 coins </div> <div style="text-align: center;">  3 coins </div> </div>	<p>A 122 cents</p> <p>C 109 cents</p> <p>E 107 cents</p>	<p>B 127 cents</p> <p>D 117 cents</p> <p>F 82 cents</p>
<p>3 What is the total value of these stacks of coins?</p> <div style="display: flex; justify-content: space-around; align-items: center;"> <div style="text-align: center;">  2 coins </div> <div style="text-align: center;">  3 coins </div> <div style="text-align: center;">  2 coins </div> </div>	<p>A 93 cents</p> <p>C 92 cents</p> <p>E 57 cents</p>	<p>B 81 cents</p> <p>D 82 cents</p> <p>F 102 cents</p>	<p>4 What is the total value of these stacks of coins?</p> <div style="display: flex; justify-content: space-around; align-items: center;"> <div style="text-align: center;">  3 coins </div> <div style="text-align: center;">  3 coins </div> <div style="text-align: center;">  2 coins </div> </div>	<p>A 109 cents</p> <p>C 85 cents</p> <p>E 73 cents</p>	<p>B 83 cents</p> <p>D 82 cents</p> <p>F 108 cents</p>
<p>5 What is the total value of these stacks of coins?</p> <div style="display: flex; justify-content: space-around; align-items: center;"> <div style="text-align: center;">  4 coins </div> <div style="text-align: center;">  4 coins </div> <div style="text-align: center;">  3 coins </div> </div>	<p>A 109 cents</p> <p>C 118 cents</p> <p>E 120 cents</p>	<p>B 94 cents</p> <p>D 129 cents</p> <p>F 119 cents</p>	<p>6 What is the total value of these stacks of coins?</p> <div style="display: flex; justify-content: space-around; align-items: center;"> <div style="text-align: center;">  2 coins </div> <div style="text-align: center;">  2 coins </div> <div style="text-align: center;">  3 coins </div> </div>	<p>A 72 cents</p> <p>C 112 cents</p> <p>E 107 cents</p>	<p>B 98 cents</p> <p>D 97 cents</p> <p>F 117 cents</p>
<p>7 What is the total value of these stacks of coins?</p> <div style="display: flex; justify-content: space-around; align-items: center;"> <div style="text-align: center;">  2 coins </div> <div style="text-align: center;">  2 coins </div> <div style="text-align: center;">  3 coins </div> </div>	<p>A 147 cents</p> <p>C 97 cents</p> <p>E 117 cents</p>	<p>B 72 cents</p> <p>D 122 cents</p> <p>F 98 cents</p>	<p>8 What is the total value of these stacks of coins?</p> <div style="display: flex; justify-content: space-around; align-items: center;"> <div style="text-align: center;">  4 coins </div> <div style="text-align: center;">  4 coins </div> <div style="text-align: center;">  2 coins </div> </div>	<p>A 94 cents</p> <p>C 100 cents</p> <p>E 95 cents</p>	<p>B 99 cents</p> <p>D 104 cents</p> <p>F 84 cents</p>