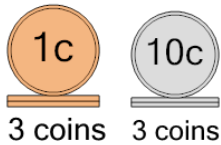




Coin Math - Count Piles - Pennies and Dimes

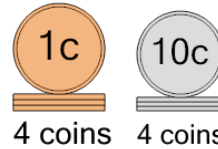


1 What is the total value of these stacks of coins?



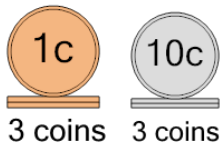
A	33 cents	B	32 cents
C	34 cents	D	63 cents
E	53 cents	F	35 cents

2 What is the total value of these stacks of coins?



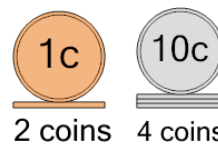
A	69 cents	B	45 cents
C	34 cents	D	44 cents
E	64 cents	F	46 cents

3 What is the total value of these stacks of coins?



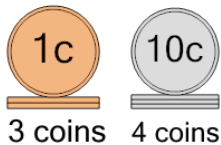
A	43 cents	B	33 cents
C	53 cents	D	32 cents
E	34 cents	F	23 cents

4 What is the total value of these stacks of coins?



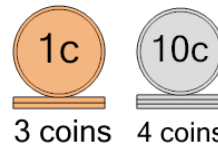
A	32 cents	B	43 cents
C	42 cents	D	62 cents

5 What is the total value of these stacks of coins?



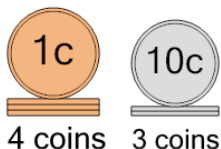
A	68 cents	B	44 cents
C	69 cents	D	43 cents
E	33 cents	F	53 cents

6 What is the total value of these stacks of coins?



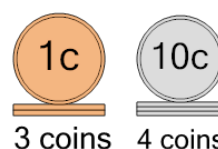
A	43 cents	B	63 cents
C	44 cents	D	45 cents
E	53 cents	F	42 cents

7 What is the total value of these stacks of coins?



A	35 cents	B	24 cents
C	34 cents	D	33 cents
E	44 cents	F	39 cents

8 What is the total value of these stacks of coins?



A	53 cents	B	68 cents
C	33 cents	D	43 cents
E	63 cents	F	78 cents