
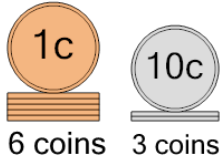




## Coin Math - Count Piles - Pennies and Dimes

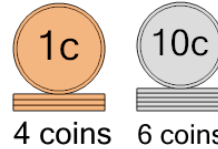


**1** What is the total value of these stacks of coins?



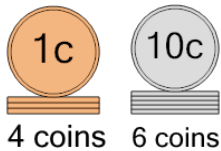
A	56 cents	B	35 cents
C	36 cents	D	37 cents
E	46 cents	F	38 cents

**2** What is the total value of these stacks of coins?



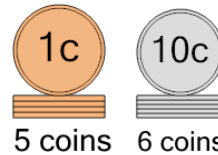
A	64 cents	B	75 cents
C	54 cents	D	74 cents
E	65 cents	F	84 cents

**3** What is the total value of these stacks of coins?



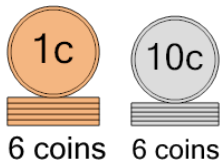
A	74 cents	B	84 cents
C	65 cents	D	64 cents
E	54 cents		

**4** What is the total value of these stacks of coins?



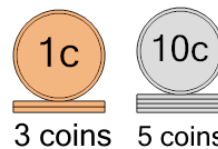
A	67 cents	B	70 cents
C	64 cents	D	66 cents
E	65 cents	F	76 cents

**5** What is the total value of these stacks of coins?



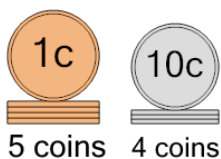
A	56 cents	B	72 cents
C	96 cents	D	66 cents
E	77 cents	F	86 cents

**6** What is the total value of these stacks of coins?



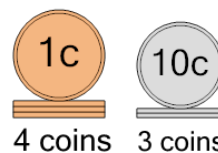
A	88 cents	B	54 cents
C	52 cents	D	53 cents
E	43 cents	F	63 cents

**7** What is the total value of these stacks of coins?



A	47 cents	B	35 cents
C	55 cents	D	51 cents
E	65 cents	F	45 cents

**8** What is the total value of these stacks of coins?



A	69 cents	B	35 cents
C	44 cents	D	34 cents
E	33 cents	F	54 cents